


Autumn Trees Picture Ratios (J)

Name: _____

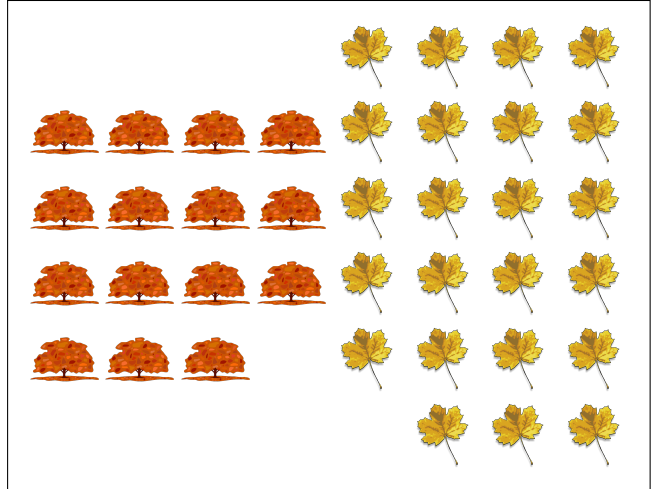
Date: _____

Determine each ratio and simplify if necessary.




$$\text{Yellow leaf} : (\text{Orange leaf} + \text{Yellow leaf}) =$$

$$\text{Orange leaf} : (\text{Yellow leaf} + \text{Orange leaf}) =$$




$$\text{Tree} : (\text{Yellow leaf} + \text{Tree}) =$$

$$\text{Yellow leaf} : (\text{Tree} + \text{Yellow leaf}) =$$



$$\text{Oak leaf} : (\text{Acorn} + \text{Oak leaf}) =$$

$$\text{Acorn} : (\text{Oak leaf} + \text{Acorn}) =$$



$$\text{Tree} : (\text{Acorn} + \text{Tree}) =$$

$$\text{Acorn} : (\text{Tree} + \text{Acorn}) =$$

Autumn Trees Picture Ratios (J) Answers

Name: _____


Date: _____

Determine each ratio and simplify if necessary.




$$\text{Yellow leaf} : (\text{Orange leaf} + \text{Yellow leaf}) = 24 : 44 = 6 : 11$$

$$\text{Orange leaf} : (\text{Yellow leaf} + \text{Orange leaf}) = 20 : 44 = 5 : 11$$




$$\text{Orange tree} : (\text{Yellow leaf} + \text{Orange tree}) = 15 : 38$$

$$\text{Yellow leaf} : (\text{Orange tree} + \text{Yellow leaf}) = 23 : 38$$



$$\text{Orange leaf} : (\text{Green leaf} + \text{Orange leaf}) = 24 : 37$$

$$\text{Green leaf} : (\text{Orange leaf} + \text{Green leaf}) = 13 : 37$$



$$\text{Yellow tree} : (\text{Brown acorn} + \text{Yellow tree}) = 23 : 41$$

$$\text{Brown acorn} : (\text{Yellow tree} + \text{Brown acorn}) = 18 : 41$$