


Autumn Trees Picture Ratios (A)

Name: _____


Date: _____

Determine each ratio and simplify if necessary.




$$\text{leaf} : (\text{tree} + \text{leaf}) =$$

$$\text{tree} : (\text{leaf} + \text{tree}) =$$



$$\text{tree} : (\text{leaf} + \text{tree}) =$$

$$\text{leaf} : (\text{tree} + \text{leaf}) =$$



$$\text{acorn} : (\text{leaf} + \text{acorn}) =$$

$$\text{leaf} : (\text{acorn} + \text{leaf}) =$$



$$\text{green leaf} : (\text{orange leaf} + \text{green leaf}) =$$


$$\text{orange leaf} : (\text{green leaf} + \text{orange leaf}) =$$

Autumn Trees Picture Ratios (A) Answers

Name: _____


Date: _____

Determine each ratio and simplify if necessary.




$$\text{leaf} : (\text{tree} + \text{leaf}) = 6 : 15 = 2 : 5$$

$$\text{tree} : (\text{leaf} + \text{tree}) = 9 : 15 = 3 : 5$$



$$\text{tree} : (\text{leaf} + \text{tree}) = 11 : 19$$

$$\text{leaf} : (\text{tree} + \text{leaf}) = 8 : 19$$



$$\text{acorn} : (\text{leaf} + \text{acorn}) = 5 : 16$$

$$\text{leaf} : (\text{acorn} + \text{leaf}) = 11 : 16$$



$$\text{branch} : (\text{leaf} + \text{branch}) = 24 : 40 = 3 : 5$$

$$\text{leaf} : (\text{branch} + \text{leaf}) = 16 : 40 = 2 : 5$$