


Autumn Trees Picture Ratios (E)

Name: _____


Date: _____

Determine each ratio and simplify if necessary.




$$\text{leaf} : (\text{acorn} + \text{leaf}) =$$

$$\text{acorn} : (\text{leaf} + \text{acorn}) =$$



$$\text{twig} : (\text{leaf} + \text{twig}) =$$

$$\text{leaf} : (\text{twig} + \text{leaf}) =$$



$$\text{yellow tree} : (\text{orange tree} + \text{yellow tree}) =$$

$$\text{orange tree} : (\text{yellow tree} + \text{orange tree}) =$$



$$\text{oak leaf} : (\text{maple leaf} + \text{oak leaf}) =$$


$$\text{maple leaf} : (\text{oak leaf} + \text{maple leaf}) =$$

Autumn Trees Picture Ratios (E) Answers

Name: _____


Date: _____

Determine each ratio and simplify if necessary.




$$\text{leaf} : (\text{acorn} + \text{leaf}) = 8 : 16 = 1 : 2$$

$$\text{acorn} : (\text{leaf} + \text{acorn}) = 8 : 16 = 1 : 2$$



$$\text{branch} : (\text{leaf} + \text{branch}) = 6 : 13$$

$$\text{leaf} : (\text{branch} + \text{leaf}) = 7 : 13$$



$$\text{orange tree} : (\text{brown tree} + \text{orange tree}) = 15 : 27 = 5 : 9$$

$$\text{brown tree} : (\text{orange tree} + \text{brown tree}) = 12 : 27 = 4 : 9$$



$$\text{oak leaf} : (\text{maple leaf} + \text{oak leaf}) = 11 : 24$$

$$\text{maple leaf} : (\text{oak leaf} + \text{maple leaf}) = 13 : 24$$