


Summer Missing Digits Addition (A)

Name: _____


Date: _____

Fill in the missing digits that melted in the hot summer sun.


1.
$$\begin{array}{r} \square 8 \square \\ + 9 \square 5 \\ \hline \square 6 1 1 \end{array}$$




2.
$$\begin{array}{r} 3 1 3 \\ + 6 \square 2 \\ \hline \square 7 \square \end{array}$$




3.
$$\begin{array}{r} \square 6 2 \\ + 1 1 \square \\ \hline 4 \square 1 \end{array}$$




4.
$$\begin{array}{r} 5 0 3 \\ + 1 8 3 \\ \hline \square \square \square \end{array}$$




5.
$$\begin{array}{r} \square 8 \square \\ + 6 3 4 \\ \hline \square 2 \square 3 \end{array}$$




6.
$$\begin{array}{r} 7 1 7 \\ + \square 4 0 \\ \hline 8 \square \square \end{array}$$




7.
$$\begin{array}{r} 2 \square 2 \\ + 3 9 5 \\ \hline \square 2 \square \end{array}$$




8.
$$\begin{array}{r} \square \square \square \\ + 1 3 3 \\ \hline \square 0 0 3 \end{array}$$




9.
$$\begin{array}{r} \square 9 8 \\ + 4 8 \square \\ \hline \square 3 \square 3 \end{array}$$




10.
$$\begin{array}{r} 3 9 5 \\ + 6 9 \square \\ \hline \square \square \square 1 \end{array}$$




11.
$$\begin{array}{r} \square 0 2 \\ + 5 \square 9 \\ \hline \square 1 5 \square \end{array}$$




12.
$$\begin{array}{r} \square 7 4 \\ + 8 4 4 \\ \hline \square 3 \square \square \end{array}$$




13.
$$\begin{array}{r} 9 5 \square \\ + \square 3 1 \\ \hline \square 7 \square 4 \end{array}$$




14.
$$\begin{array}{r} \square 5 6 \\ + 7 \square 8 \\ \hline \square 6 1 \square \end{array}$$




15.
$$\begin{array}{r} 8 5 5 \\ + 6 8 \square \\ \hline \square \square \square 8 \end{array}$$




16.
$$\begin{array}{r} \square 1 7 \\ + 2 \square 2 \\ \hline 9 3 \square \end{array}$$




17.
$$\begin{array}{r} \square 1 \square \\ + 8 2 1 \\ \hline \square 7 \square 5 \end{array}$$




18.
$$\begin{array}{r} 5 6 1 \\ + 7 \square \square \\ \hline \square \square 5 0 \end{array}$$



19.
$$\begin{array}{r} 8 \square 3 \\ + \square 6 \square \\ \hline \square 2 4 5 \end{array}$$



20.
$$\begin{array}{r} 2 0 9 \\ + \square 7 4 \\ \hline \square 0 \square \square \end{array}$$




Summer Missing Digits Addition (A) Answers

Name: _____


Date: _____

Fill in the missing digits that melted in the hot summer sun.


1.
$$\begin{array}{r} \boxed{6} \boxed{8} \boxed{6} \\ + \quad 9 \boxed{2} \boxed{5} \\ \hline \boxed{1} \boxed{6} \boxed{1} \boxed{1} \end{array}$$




2.
$$\begin{array}{r} 3 \ 1 \ 3 \\ + \quad 6 \boxed{6} \boxed{2} \\ \hline \boxed{9} \boxed{7} \boxed{5} \end{array}$$




3.
$$\begin{array}{r} \boxed{3} \boxed{6} \boxed{2} \\ + \quad 1 \ 1 \ \boxed{9} \\ \hline 4 \ \boxed{8} \ 1 \end{array}$$




4.
$$\begin{array}{r} 5 \ 0 \ 3 \\ + \quad 1 \ 8 \ 3 \\ \hline \boxed{6} \boxed{8} \boxed{6} \end{array}$$




5.
$$\begin{array}{r} \boxed{5} \boxed{8} \boxed{9} \\ + \quad 6 \ 3 \ 4 \\ \hline \boxed{1} \boxed{2} \boxed{2} \boxed{3} \end{array}$$




6.
$$\begin{array}{r} 7 \ 1 \ 7 \\ + \quad \boxed{1} \boxed{4} \ 0 \\ \hline 8 \ \boxed{5} \ \boxed{7} \end{array}$$




7.
$$\begin{array}{r} 2 \ \boxed{3} \ 2 \\ + \quad 3 \ 9 \ 5 \\ \hline \boxed{6} \ \boxed{2} \ \boxed{7} \end{array}$$




8.
$$\begin{array}{r} \boxed{8} \boxed{7} \boxed{0} \\ + \quad 1 \ 3 \ 3 \\ \hline \boxed{1} \ 0 \ 0 \ 3 \end{array}$$




9.
$$\begin{array}{r} \boxed{8} \ 9 \ 8 \\ + \quad 4 \ 8 \ \boxed{5} \\ \hline \boxed{1} \ \boxed{3} \ \boxed{8} \ 3 \end{array}$$




10.
$$\begin{array}{r} 3 \ 9 \ 5 \\ + \quad 6 \ 9 \ \boxed{6} \\ \hline \boxed{1} \ \boxed{0} \ \boxed{9} \ 1 \end{array}$$




11.
$$\begin{array}{r} \boxed{6} \ 0 \ 2 \\ + \quad 5 \ \boxed{4} \ 9 \\ \hline \boxed{1} \ \boxed{1} \ \boxed{5} \ \boxed{1} \end{array}$$




12.
$$\begin{array}{r} \boxed{4} \ 7 \ 4 \\ + \quad 8 \ 4 \ 4 \\ \hline \boxed{1} \ \boxed{3} \ \boxed{1} \ \boxed{8} \end{array}$$




13.
$$\begin{array}{r} 9 \ 5 \ \boxed{3} \\ + \quad \boxed{8} \ 3 \ 1 \\ \hline \boxed{1} \ \boxed{7} \ \boxed{8} \ 4 \end{array}$$




14.
$$\begin{array}{r} \boxed{8} \ 5 \ 6 \\ + \quad 7 \ \boxed{5} \ 8 \\ \hline \boxed{1} \ \boxed{6} \ 1 \ \boxed{4} \end{array}$$




15.
$$\begin{array}{r} 8 \ 5 \ 5 \\ + \quad 6 \ 8 \ \boxed{3} \\ \hline \boxed{1} \ \boxed{5} \ \boxed{3} \ 8 \end{array}$$




16.
$$\begin{array}{r} \boxed{7} \ 1 \ 7 \\ + \quad 2 \ \boxed{2} \ 2 \\ \hline 9 \ 3 \ \boxed{9} \end{array}$$




17.
$$\begin{array}{r} \boxed{9} \ 1 \ \boxed{4} \\ + \quad 8 \ 2 \ 1 \\ \hline \boxed{1} \ \boxed{7} \ \boxed{3} \ 5 \end{array}$$



18.
$$\begin{array}{r} 5 \ 6 \ 1 \\ + \quad 7 \ \boxed{8} \ \boxed{9} \\ \hline \boxed{1} \ \boxed{3} \ 5 \ 0 \end{array}$$



19.
$$\begin{array}{r} 8 \ \boxed{8} \ 3 \\ + \quad \boxed{3} \ 6 \ \boxed{2} \\ \hline \boxed{1} \ 2 \ 4 \ 5 \end{array}$$



20.
$$\begin{array}{r} 2 \ 0 \ 9 \\ + \quad \boxed{8} \ 7 \ 4 \\ \hline \boxed{1} \ 0 \ \boxed{8} \ \boxed{3} \end{array}$$

