


Summer Missing Digits Addition (H)

Name: _____


Date: _____

Fill in the missing digits that melted in the hot summer sun.


1.
$$\begin{array}{r} 8 \square\square \\ + 27 \\ \hline \square 0 1 \end{array}$$




2.
$$\begin{array}{r} 709 \\ + \square 1 \square \\ \hline \square 0 \square 9 \end{array}$$




3.
$$\begin{array}{r} \square\square 2 \\ + 79 \square \\ \hline \square 6 6 9 \end{array}$$




4.
$$\begin{array}{r} \square 7 5 \\ + 308 \\ \hline \square 0 \square \square \end{array}$$




5.
$$\begin{array}{r} 18 \square \\ + 881 \\ \hline \square \square \square 9 \end{array}$$




6.
$$\begin{array}{r} 7 \square 6 \\ + \square 20 \\ \hline 88 \square \end{array}$$




7.
$$\begin{array}{r} 288 \\ + \square 7 \\ \hline \square 0 \square \end{array}$$




8.
$$\begin{array}{r} \square 00 \\ + 9 \square \square \\ \hline \square 6 6 9 \end{array}$$




9.
$$\begin{array}{r} 6 \square\square \\ + 340 \\ \hline \square 6 0 \end{array}$$




10.
$$\begin{array}{r} 6 \square \\ + \square 1 7 \\ \hline 2 \square 8 \end{array}$$




11.
$$\begin{array}{r} 5 \square \\ + \square 4 7 \\ \hline 7 \square 6 \end{array}$$




12.
$$\begin{array}{r} \square 5 \square \\ + 713 \\ \hline 8 \square 6 \end{array}$$




13.
$$\begin{array}{r} \square \square \square \\ + 82 \\ \hline 220 \end{array}$$




14.
$$\begin{array}{r} 4 \square 9 \\ + \square 60 \\ \hline 67 \square \end{array}$$




15.
$$\begin{array}{r} 46 \square \\ + 354 \\ \hline \square \square 6 \end{array}$$




16.
$$\begin{array}{r} 313 \\ + \square \square \square \\ \hline \square 2 7 \end{array}$$




17.
$$\begin{array}{r} 456 \\ + \square 9 \square \\ \hline \square 1 \square 8 \end{array}$$




18.
$$\begin{array}{r} \square \square 7 \\ + 33 \\ \hline 14 \square \end{array}$$



19.
$$\begin{array}{r} \square \square 5 \\ + 980 \\ \hline \square 8 1 \square \end{array}$$



20.
$$\begin{array}{r} \square 9 \\ + 12 \square \\ \hline \square 4 5 \end{array}$$




Summer Missing Digits Addition (H) Answers

Name: _____


Date: _____

Fill in the missing digits that melted in the hot summer sun.


1.
$$\begin{array}{r} 874 \\ + 27 \\ \hline 901 \end{array}$$




2.
$$\begin{array}{r} 709 \\ + 310 \\ \hline 1019 \end{array}$$




3.
$$\begin{array}{r} 872 \\ + 797 \\ \hline 1669 \end{array}$$




4.
$$\begin{array}{r} 775 \\ + 308 \\ \hline 1083 \end{array}$$




5.
$$\begin{array}{r} 188 \\ + 881 \\ \hline 1069 \end{array}$$




6.
$$\begin{array}{r} 766 \\ + 120 \\ \hline 886 \end{array}$$




7.
$$\begin{array}{r} 288 \\ + 17 \\ \hline 305 \end{array}$$




8.
$$\begin{array}{r} 700 \\ + 969 \\ \hline 1669 \end{array}$$




9.
$$\begin{array}{r} 620 \\ + 340 \\ \hline 960 \end{array}$$



10.
$$\begin{array}{r} 61 \\ + 217 \\ \hline 278 \end{array}$$




11.
$$\begin{array}{r} 59 \\ + 647 \\ \hline 706 \end{array}$$




12.
$$\begin{array}{r} 153 \\ + 713 \\ \hline 866 \end{array}$$




13.
$$\begin{array}{r} 138 \\ + 82 \\ \hline 220 \end{array}$$




14.
$$\begin{array}{r} 419 \\ + 260 \\ \hline 679 \end{array}$$




15.
$$\begin{array}{r} 462 \\ + 354 \\ \hline 816 \end{array}$$




16.
$$\begin{array}{r} 313 \\ + 14 \\ \hline 327 \end{array}$$




17.
$$\begin{array}{r} 456 \\ + 692 \\ \hline 1148 \end{array}$$



18.
$$\begin{array}{r} 107 \\ + 33 \\ \hline 140 \end{array}$$



19.
$$\begin{array}{r} 835 \\ + 980 \\ \hline 1815 \end{array}$$



20.
$$\begin{array}{r} 19 \\ + 126 \\ \hline 145 \end{array}$$

