


Summer Missing Digits Division (A)

Name: _____


Date: _____

Fill in the missing digits that melted in the hot summer sun.


1.
$$\begin{array}{r} 9 \\ 11 \overline{) 9 \square} \end{array}$$




2.
$$\begin{array}{r} \square \\ 4 \overline{) 32} \end{array}$$




3.
$$\begin{array}{r} 3 \\ 4 \overline{) 1 \square} \end{array}$$




4.
$$\begin{array}{r} 10 \\ \square \overline{) 50} \end{array}$$




5.
$$\begin{array}{r} 1 \square \\ 12 \overline{) \square 44} \end{array}$$




6.
$$\begin{array}{r} 6 \\ \square \overline{) 18} \end{array}$$




7.
$$\begin{array}{r} \square \\ 10 \overline{) 40} \end{array}$$




8.
$$\begin{array}{r} 3 \\ 1 \square \overline{) 33} \end{array}$$




9.
$$\begin{array}{r} 1 \square \\ 11 \overline{) \square 21} \end{array}$$




10.
$$\begin{array}{r} \square \\ 6 \overline{) 48} \end{array}$$




11.
$$\begin{array}{r} 6 \\ \square \overline{) 54} \end{array}$$




12.
$$\begin{array}{r} \square \\ 5 \overline{) 15} \end{array}$$




13.
$$\begin{array}{r} 9 \\ 7 \overline{) 6 \square} \end{array}$$




14.
$$\begin{array}{r} 4 \\ \square \overline{) 24} \end{array}$$




15.
$$\begin{array}{r} 11 \\ \square \overline{) 66} \end{array}$$




16.
$$\begin{array}{r} 8 \\ 2 \overline{) 1 \square} \end{array}$$




17.
$$\begin{array}{r} 7 \\ 9 \overline{) 6 \square} \end{array}$$




18.
$$\begin{array}{r} 1 \square \\ 4 \overline{) 40} \end{array}$$



19.
$$\begin{array}{r} 4 \\ \square \overline{) 36} \end{array}$$



20.
$$\begin{array}{r} 2 \\ 8 \overline{) 1 \square} \end{array}$$




Summer Missing Digits Division (A) Answers

Name: _____


Date: _____

Fill in the missing digits that melted in the hot summer sun.


1.
$$\begin{array}{r} 9 \\ 11 \overline{) 99} \end{array}$$




2.
$$\begin{array}{r} 8 \\ 4 \overline{) 32} \end{array}$$




3.
$$\begin{array}{r} 3 \\ 4 \overline{) 12} \end{array}$$




4.
$$\begin{array}{r} 10 \\ 5 \overline{) 50} \end{array}$$




5.
$$\begin{array}{r} 12 \\ 12 \overline{) 144} \end{array}$$




6.
$$\begin{array}{r} 6 \\ 3 \overline{) 18} \end{array}$$




7.
$$\begin{array}{r} 4 \\ 10 \overline{) 40} \end{array}$$




8.
$$\begin{array}{r} 3 \\ 11 \overline{) 33} \end{array}$$




9.
$$\begin{array}{r} 11 \\ 11 \overline{) 121} \end{array}$$




10.
$$\begin{array}{r} 8 \\ 6 \overline{) 48} \end{array}$$




11.
$$\begin{array}{r} 6 \\ 9 \overline{) 54} \end{array}$$




12.
$$\begin{array}{r} 3 \\ 5 \overline{) 15} \end{array}$$




13.
$$\begin{array}{r} 9 \\ 7 \overline{) 63} \end{array}$$




14.
$$\begin{array}{r} 4 \\ 6 \overline{) 24} \end{array}$$




15.
$$\begin{array}{r} 11 \\ 6 \overline{) 66} \end{array}$$




16.
$$\begin{array}{r} 8 \\ 2 \overline{) 16} \end{array}$$




17.
$$\begin{array}{r} 7 \\ 9 \overline{) 63} \end{array}$$



18.
$$\begin{array}{r} 10 \\ 4 \overline{) 40} \end{array}$$



19.
$$\begin{array}{r} 4 \\ 9 \overline{) 36} \end{array}$$



20.
$$\begin{array}{r} 2 \\ 8 \overline{) 16} \end{array}$$

