

Summer Missing Digits Addition and Subtraction (A)

Name: _____


Date: _____

Fill in the missing digits that melted in the hot summer sun.


1.
$$\begin{array}{r} 388 \\ + 22 \\ \hline \square\square\square \end{array}$$




2.
$$\begin{array}{r} \square\square\square 2 \\ - 873 \\ \hline 27\square \end{array}$$




3.
$$\begin{array}{r} 8\square\square \\ + 186 \\ \hline \square\square 72 \end{array}$$




4.
$$\begin{array}{r} \square 460 \\ - \square\square\square \\ \hline 876 \end{array}$$




5.
$$\begin{array}{r} 414 \\ - 48 \\ \hline \square\square\square \end{array}$$




6.
$$\begin{array}{r} 860 \\ + 8\square\square \\ \hline \square\square 80 \end{array}$$




7.
$$\begin{array}{r} \square 2\square \\ + 8\square 2 \\ \hline \square 229 \end{array}$$




8.
$$\begin{array}{r} \square 08\square \\ - 1\square 6 \\ \hline \square 58 \end{array}$$




9.
$$\begin{array}{r} \square\square\square \\ - 611 \\ \hline 297 \end{array}$$




10.
$$\begin{array}{r} 952 \\ + 109 \\ \hline \square\square\square\square \end{array}$$




11.
$$\begin{array}{r} 719 \\ + 45\square \\ \hline \square\square\square 3 \end{array}$$




12.
$$\begin{array}{r} \square 5\square \\ - 344 \\ \hline 5\square 3 \end{array}$$




13.
$$\begin{array}{r} 219 \\ + \square 0\square \\ \hline 4\square 5 \end{array}$$




14.
$$\begin{array}{r} \square\square 7 \\ - 53\square \\ \hline 35 \end{array}$$




15.
$$\begin{array}{r} \square 0\square \\ - 55 \\ \hline 7\square 0 \end{array}$$




16.
$$\begin{array}{r} 474 \\ - \square 1\square \\ \hline 2\square 6 \end{array}$$




17.
$$\begin{array}{r} \square 192 \\ - \square 90 \\ \hline 9\square\square \end{array}$$




18.
$$\begin{array}{r} \square\square 5 \\ + 9\square \\ \hline 495 \end{array}$$



19.
$$\begin{array}{r} 6\square 7 \\ + 91\square \\ \hline \square\square 53 \end{array}$$



20.
$$\begin{array}{r} \square\square 7 \\ + 112 \\ \hline 45\square \end{array}$$




Summer Missing Digits Addition and Subtraction (A) Answers

Name: _____


Date: _____

Fill in the missing digits that melted in the hot summer sun.


1.
$$\begin{array}{r} 388 \\ + 22 \\ \hline 410 \end{array}$$




2.
$$\begin{array}{r} 1152 \\ - 873 \\ \hline 279 \end{array}$$




3.
$$\begin{array}{r} 886 \\ + 186 \\ \hline 1072 \end{array}$$




4.
$$\begin{array}{r} 1460 \\ - 584 \\ \hline 876 \end{array}$$




5.
$$\begin{array}{r} 414 \\ - 48 \\ \hline 366 \end{array}$$




6.
$$\begin{array}{r} 860 \\ + 820 \\ \hline 1680 \end{array}$$




7.
$$\begin{array}{r} 427 \\ + 802 \\ \hline 1229 \end{array}$$




8.
$$\begin{array}{r} 1084 \\ - 126 \\ \hline 958 \end{array}$$




9.
$$\begin{array}{r} 908 \\ - 611 \\ \hline 297 \end{array}$$




10.
$$\begin{array}{r} 952 \\ + 109 \\ \hline 1061 \end{array}$$




11.
$$\begin{array}{r} 719 \\ + 454 \\ \hline 1173 \end{array}$$




12.
$$\begin{array}{r} 857 \\ - 344 \\ \hline 513 \end{array}$$




13.
$$\begin{array}{r} 219 \\ + 206 \\ \hline 425 \end{array}$$




14.
$$\begin{array}{r} 567 \\ - 532 \\ \hline 35 \end{array}$$




15.
$$\begin{array}{r} 805 \\ - 55 \\ \hline 750 \end{array}$$




16.
$$\begin{array}{r} 474 \\ - 218 \\ \hline 256 \end{array}$$




17.
$$\begin{array}{r} 1192 \\ - 290 \\ \hline 902 \end{array}$$



18.
$$\begin{array}{r} 405 \\ + 90 \\ \hline 495 \end{array}$$



19.
$$\begin{array}{r} 637 \\ + 916 \\ \hline 1553 \end{array}$$



20.
$$\begin{array}{r} 347 \\ + 112 \\ \hline 459 \end{array}$$

