

Summer Missing Digits Multiplication and Division (A)

Name: _____

Date: _____

Score: _____

Fill in the missing digits that melted in the hot summer sun.

1.
$$\begin{array}{r} 2 \\ \times 1 \square \\ \hline 2 0 \end{array}$$



2.
$$\begin{array}{r} 6 \\ 7 \overline{) 4 \square} \end{array}$$



3.
$$\begin{array}{r} \square \\ 2 \overline{) 1 0} \end{array}$$



4.
$$\begin{array}{r} 7 \\ 1 0 \overline{) 7 \square} \end{array}$$



5.
$$\begin{array}{r} 1 \square \\ 2 \overline{) 2 4} \end{array}$$



6.
$$\begin{array}{r} 4 \\ \times \square \\ \hline 8 \end{array}$$



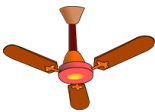
7.
$$\begin{array}{r} \square \\ \times 0 \\ \hline 6 0 \end{array}$$



8.
$$\begin{array}{r} 3 \\ \times 4 \\ \hline 1 \square \end{array}$$



9.
$$\begin{array}{r} \square \\ \times 6 \\ \hline 5 4 \end{array}$$



10.
$$\begin{array}{r} \square \\ 1 0 \overline{) 5 0} \end{array}$$



11.
$$\begin{array}{r} 2 \\ 8 \overline{) 1 \square} \end{array}$$



12.
$$\begin{array}{r} 9 \\ 7 \overline{) 6 \square} \end{array}$$



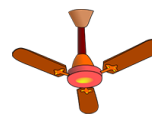
13.
$$\begin{array}{r} 2 \\ 1 \square \overline{) 2 0} \end{array}$$



14.
$$\begin{array}{r} 3 \\ \times \square \\ \hline 1 2 \end{array}$$



15.
$$\begin{array}{r} \square \\ \times 1 1 \\ \hline 2 2 \end{array}$$



16.
$$\begin{array}{r} 1 \square \\ 8 \overline{) 8 0} \end{array}$$



17.
$$\begin{array}{r} 2 \\ \times 6 \\ \hline 1 \square \end{array}$$



18.
$$\begin{array}{r} \square \\ 3 \overline{) 1 5} \end{array}$$



19.
$$\begin{array}{r} 8 \\ \times 9 \\ \hline 7 \square \end{array}$$



20.
$$\begin{array}{r} 3 \\ \times 7 \\ \hline 2 \square \end{array}$$



Summer Missing Digits Multiplication and Division (A) Answers

Name: _____

Date: _____

Score: _____

Fill in the missing digits that melted in the hot summer sun.

1.
$$\begin{array}{r} 2 \\ \times 1 \boxed{0} \\ \hline 2 0 \end{array}$$



2.
$$\begin{array}{r} 6 \\ 7 \boxed{2} \\ \hline \end{array}$$



3.
$$\begin{array}{r} \boxed{5} \\ 2 0 \\ \hline \end{array}$$



4.
$$\begin{array}{r} 7 \\ 10 \boxed{0} \\ \hline \end{array}$$



5.
$$\begin{array}{r} 4 \\ 2 \boxed{2} \\ \hline \end{array}$$



6.
$$\begin{array}{r} 4 \\ \times \boxed{2} \\ \hline 8 \end{array}$$



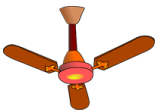
7.
$$\begin{array}{r} \boxed{6} \\ \times 1 0 \\ \hline 6 0 \end{array}$$



8.
$$\begin{array}{r} 3 \\ \times 4 \\ \hline \boxed{2} \end{array}$$



9.
$$\begin{array}{r} \boxed{9} \\ \times 6 \\ \hline 5 4 \end{array}$$



10.
$$\begin{array}{r} 0 \\ 10 \boxed{5} \\ \hline \end{array}$$



11.
$$\begin{array}{r} 2 \\ 8 \boxed{6} \\ \hline \end{array}$$



12.
$$\begin{array}{r} 9 \\ 7 \boxed{3} \\ \hline \end{array}$$




13.
$$\begin{array}{r} 0 \\ 1 \boxed{0} 0 \\ \hline \end{array}$$



14.
$$\begin{array}{r} 3 \\ \times \boxed{4} \\ \hline 2 \end{array}$$



15.
$$\begin{array}{r} \boxed{2} \\ \times 1 1 \\ \hline 2 2 \end{array}$$



16.
$$\begin{array}{r} 0 \\ 8 \boxed{0} \\ \hline \end{array}$$



17.
$$\begin{array}{r} 2 \\ \times 6 \\ \hline \boxed{2} \end{array}$$



18.
$$\begin{array}{r} 5 \\ 3 \boxed{5} \\ \hline \end{array}$$



19.
$$\begin{array}{r} 8 \\ \times 9 \\ \hline 7 \boxed{2} \end{array}$$



20.
$$\begin{array}{r} 3 \\ \times 7 \\ \hline \boxed{2} \boxed{1} \end{array}$$

