







Reading Pictographs (D)

Answer the questions about the pictograph.

Days with Rain in May in 5 Towns

Littleton	
Bigton	
Smallton	
Largeton	
Carleton	






 = 1 rain day


1. Which town had the most days of rain in May? How many?
2. Which town had the fewest days of rain in May? How many?
3. How many more days of rain did Littleton have than Smallton?
4. Which towns had twice as many days of rain as another town? List all pairs of towns.
5. Another town, Johnston, had 5 days of rain. Is that more days or fewer days than the other towns?

Reading Pictographs (D) Answers

Answer the questions about the pictograph.

Days with Rain in May in 5 Towns

Littleton	
Bigton	
Smallton	
Largeton	
Carleton	

 = 1 rain day

1. Which town had the most days of rain in May? How many?

Bigton; 8 days

2. Which town had the fewest days of rain in May? How many?

Smallton; 2 days

3. How many more days of rain did Littleton have than Smallton?

2 more days

4. Which towns had twice as many days of rain as another town? List all pairs of towns.

Bigton and Littleton; Littleton and Smallton; Carleton and Smallton

5. Another town, Johnston, had 5 days of rain. Is that more days or fewer days than the other towns?

More than Littleton, Smallton and Carleton. Fewer than Bigton & Largeton