







Reading Pictographs (F)

Answer the questions about the pictograph.

Chairs that Need Repair at B. Pascal P.S.

Classroom 1	
Classroom 2	
Classroom 3	
Classroom 4	
Classroom 5	

 = 1 chair

1. Which classroom has the most chairs that need repair? How many?
2. Which classroom has the fewest chairs than need repair? How many?
3. If 6 parents volunteered to help repair chairs, how many would each parent repair if they all repaired the same number of chairs?
4. How many more chairs need repair in classroom 3 than in classroom 4?
5. If there were only 5 chairs in each classroom left to be repaired, how many would have been repaired already?