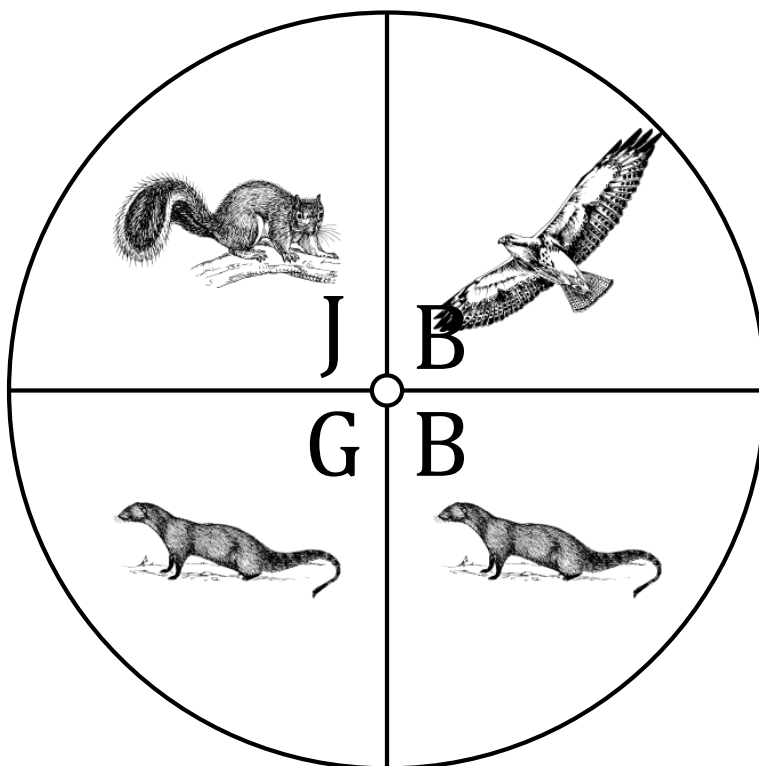


Spinner Probabilities (A)

Name: _____

Date: _____

Calculate the probability of your spinner landing on each situation.



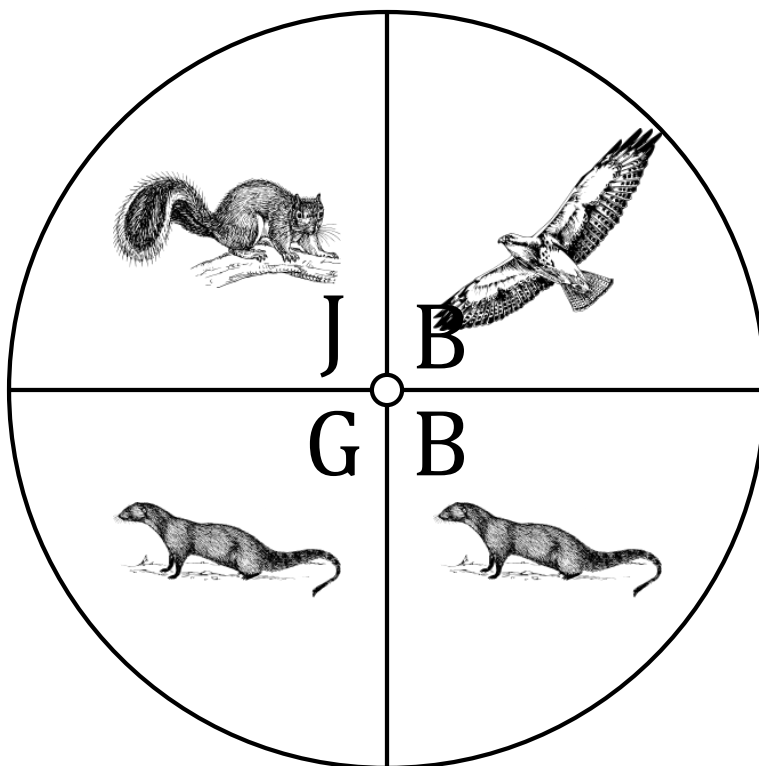
1. What is the probability of the spinner landing on a **B** in a single spin?
2. What is the probability of the spinner landing on a **J** in a single spin?
3. What is the probability of the spinner landing on a **G** in a single spin?
4. What is the probability of the spinner landing on a **mongoose** in a single spin?
5. What is the probability of the spinner landing on a **hawk** in a single spin?
6. What is the probability of the spinner landing on a **squirrel** in a single spin?
7. What is the probability of the spinner landing on a **section with a letter that is in the spelling of the animal's name** in a single spin?
8. What is the probability of the spinner landing on a **B AND a mongoose** in a single spin?
9. What is the probability of the spinner landing on a **B OR a mongoose** in a single spin?

Spinner Probabilities (A) Answers

Name: _____

Date: _____

Calculate the probability of your spinner landing on each situation.




1. What is the probability of the spinner landing on a **B** in a single spin? $\frac{2}{4} = \frac{1}{2} = 0.5 = 50\%$
2. What is the probability of the spinner landing on a **J** in a single spin? $\frac{1}{4} = 0.25 = 25\%$
3. What is the probability of the spinner landing on a **G** in a single spin? $\frac{1}{4} = 0.25 = 25\%$
4. What is the probability of the spinner landing on a **mongoose** in a single spin? $\frac{2}{4} = \frac{1}{2} = 0.5 = 50\%$
5. What is the probability of the spinner landing on a **hawk** in a single spin? $\frac{1}{4} = 0.25 = 25\%$
6. What is the probability of the spinner landing on a **squirrel** in a single spin? $\frac{1}{4} = 0.25 = 25\%$
7. What is the probability of the spinner landing on a **section with a letter that is in the spelling of the animal's name** in a single spin? $\frac{1}{4} = 0.25 = 25\%$
8. What is the probability of the spinner landing on a **B and a mongoose** in a single spin? $\frac{1}{4} = 0.25 = 25\%$
9. What is the probability of the spinner landing on a **B OR a mongoose** in a single spin? $\frac{3}{4} = 0.75 = 75\%$

Spinner Probabilities (B)

Name: _____

Date: _____

Calculate the probability of your spinner landing on each situation.




1. What is the probability of the spinner landing on **an L** in a single spin?
2. What is the probability of the spinner landing on **a G** in a single spin?
3. What is the probability of the spinner landing on **a snail** in a single spin?
4. What is the probability of the spinner landing on **a bear** in a single spin?
5. What is the probability of the spinner landing on **a C OR a squirrel** in a single spin?
6. What is the probability of the spinner landing on **a bear OR an L** in a single spin?
7. What is the probability of the spinner **NOT** landing on **a snail AND an L** in a single spin?

Spinner Probabilities (B) Answers

Name: _____

Date: _____

Calculate the probability of your spinner landing on each situation.




1. What is the probability of the spinner landing on **an L** in a single spin? $\frac{3}{4} = 0.75 = 75\%$
2. What is the probability of the spinner landing on a **G** in a single spin? $\frac{1}{4} = 0.25 = 25\%$
3. What is the probability of the spinner landing on a **snail** in a single spin? $\frac{2}{4} = \frac{1}{2} = 0.5 = 50\%$
4. What is the probability of the spinner landing on a **bear** in a single spin? $\frac{2}{4} = \frac{1}{2} = 0.5 = 50\%$
5. What is the probability of the spinner landing on a **C OR a squirrel** in a single spin? $\frac{0}{4} = 0 = 0\%$
6. What is the probability of the spinner landing on a **bear OR an L** in a single spin? $\frac{4}{4} = 1 = 100\%$
7. What is the probability of the spinner **NOT** landing on a **snail AND an L** in a single spin? $\frac{2}{4} = \frac{1}{2} = 0.5 = 50\%$

Spinner Probabilities (C)

Name: _____

Date: _____

Calculate the probability of your spinner landing on each situation.



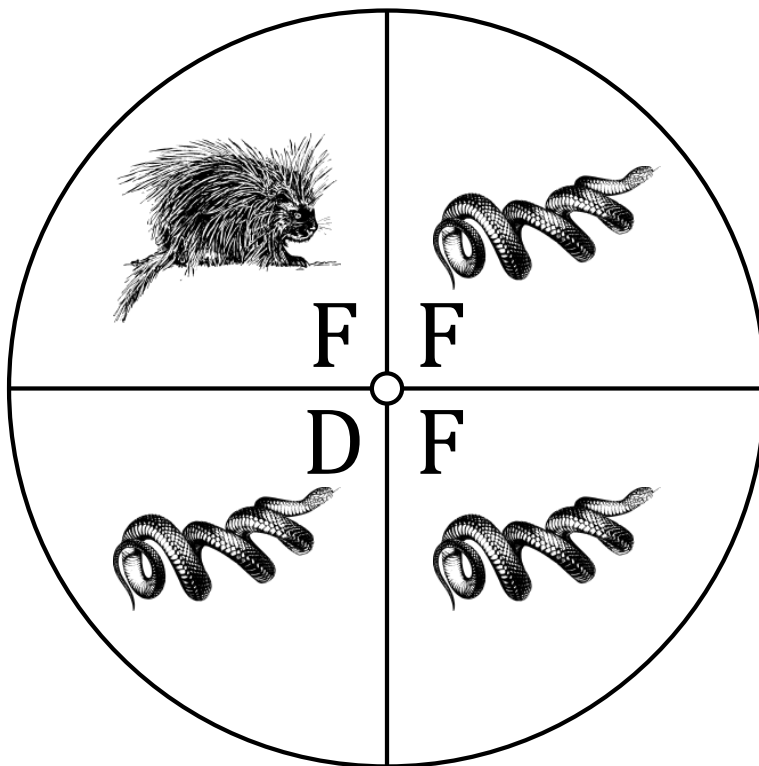
1. What is the probability of the spinner landing on **an F** in a single spin?
2. What is the probability of the spinner landing on **a D** in a single spin?
3. What is the probability of the spinner landing on **a porcupine** in a single spin?
4. What is the probability of the spinner landing on **a snake** in a single spin?

Spinner Probabilities (C) Answers

Name: _____

Date: _____

Calculate the probability of your spinner landing on each situation.




1. What is the probability of the spinner landing on **an F** in a single spin? $\frac{3}{4} = 0.75 = 75\%$
2. What is the probability of the spinner landing on **a D** in a single spin? $\frac{1}{4} = 0.25 = 25\%$
3. What is the probability of the spinner landing on **a porcupine** in a single spin? $\frac{1}{4} = 0.25 = 25\%$
4. What is the probability of the spinner landing on **a snake** in a single spin? $\frac{3}{4} = 0.75 = 75\%$

Spinner Probabilities (D)

Name: _____

Date: _____

Calculate the probability of your spinner landing on each situation.




1. What is the probability of the spinner landing on **an F** in a single spin?
2. What is the probability of the spinner landing on **a B** in a single spin?
3. What is the probability of the spinner landing on **a J** in a single spin?
4. What is the probability of the spinner landing on **a snake** in a single spin?
5. What is the probability of the spinner landing on **a fisher** in a single spin?
6. What is the probability of the spinner landing on **a raccoon** in a single spin?

Spinner Probabilities (D) Answers

Name: _____

Date: _____

Calculate the probability of your spinner landing on each situation.



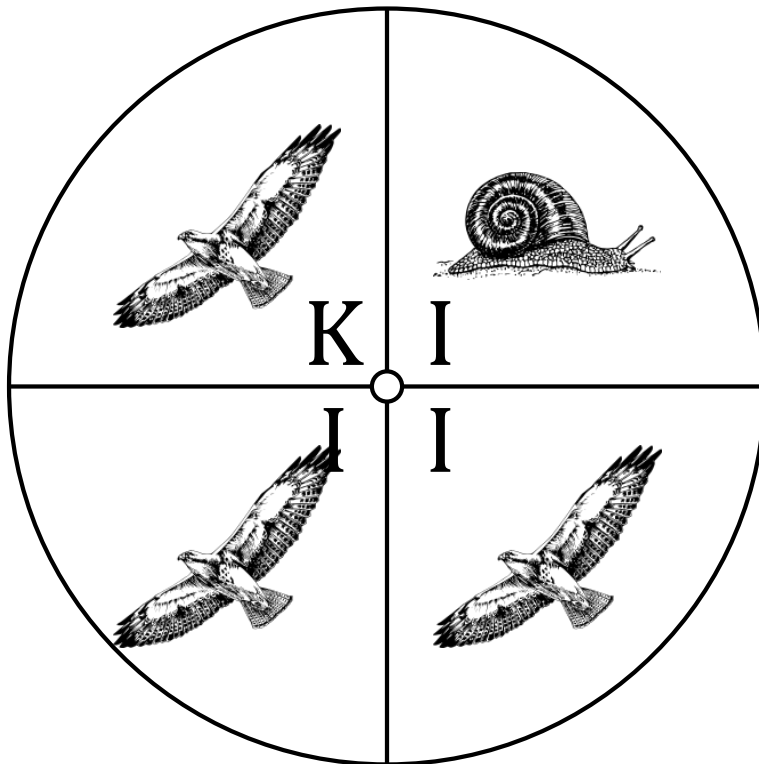
1. What is the probability of the spinner landing on **an F** in a single spin? $\frac{1}{4} = 0.25 = 25\%$
2. What is the probability of the spinner landing on **a B** in a single spin? $\frac{2}{4} = \frac{1}{2} = 0.5 = 50\%$
3. What is the probability of the spinner landing on **a J** in a single spin? $\frac{1}{4} = 0.25 = 25\%$
4. What is the probability of the spinner landing on **a snake** in a single spin? $\frac{2}{4} = \frac{1}{2} = 0.5 = 50\%$
5. What is the probability of the spinner landing on **a fisher** in a single spin? $\frac{1}{4} = 0.25 = 25\%$
6. What is the probability of the spinner landing on **a raccoon** in a single spin? $\frac{1}{4} = 0.25 = 25\%$

Spinner Probabilities (E)

Name: _____

Date: _____

Calculate the probability of your spinner landing on each situation.



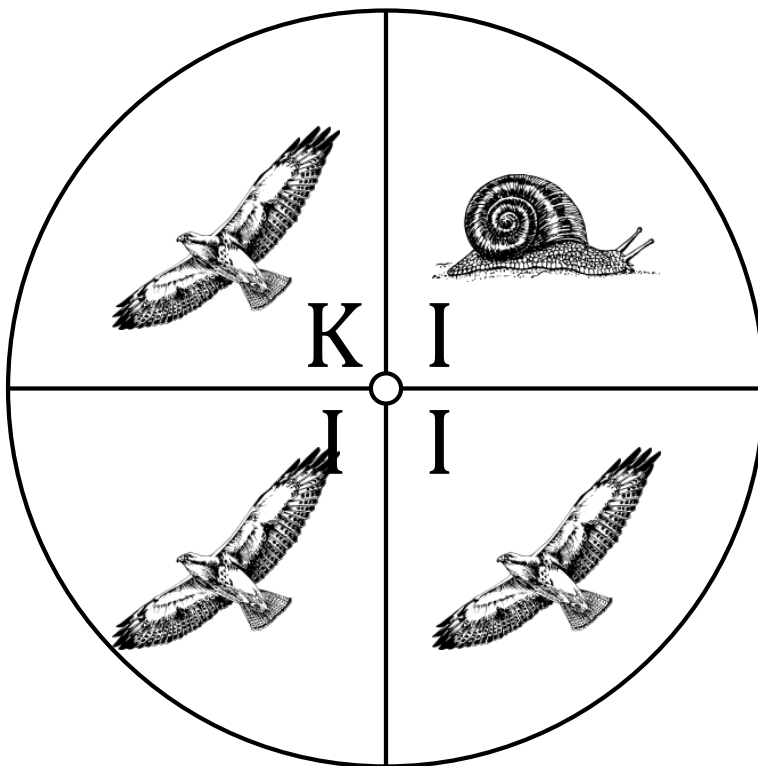
1. What is the probability of the spinner landing on **an I** in a single spin?
2. What is the probability of the spinner landing on **a K** in a single spin?
3. What is the probability of the spinner landing on **a hawk** in a single spin?
4. What is the probability of the spinner landing on **a snail** in a single spin?

Spinner Probabilities (E) Answers

Name: _____

Date: _____

Calculate the probability of your spinner landing on each situation.



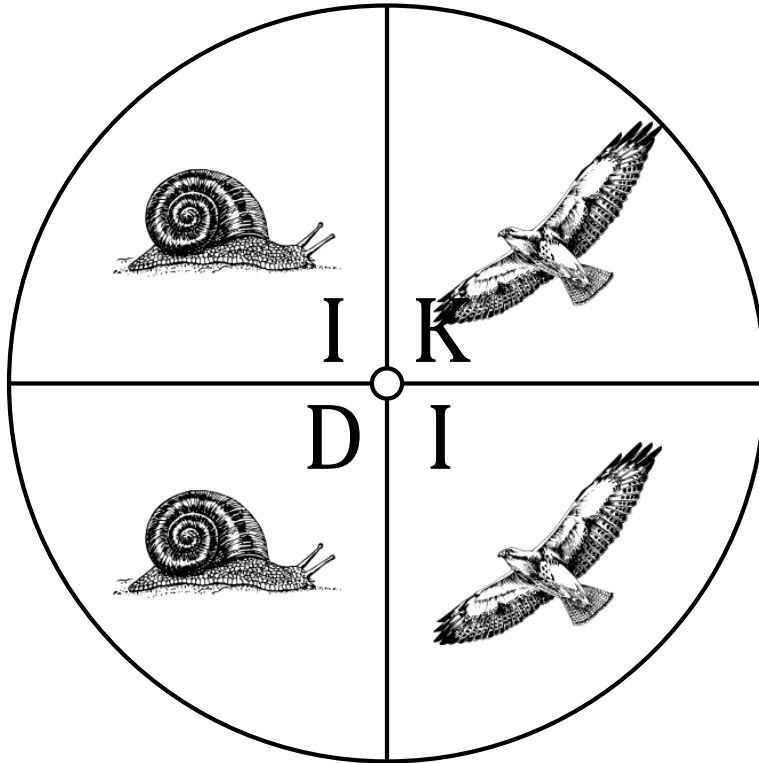
1. What is the probability of the spinner landing on **an I** in a single spin? $\frac{3}{4} = 0.75 = 75\%$
2. What is the probability of the spinner landing on **a K** in a single spin? $\frac{1}{4} = 0.25 = 25\%$
3. What is the probability of the spinner landing on **a hawk** in a single spin? $\frac{3}{4} = 0.75 = 75\%$
4. What is the probability of the spinner landing on **a snail** in a single spin? $\frac{1}{4} = 0.25 = 25\%$

Spinner Probabilities (F)

Name: _____

Date: _____

Calculate the probability of your spinner landing on each situation.



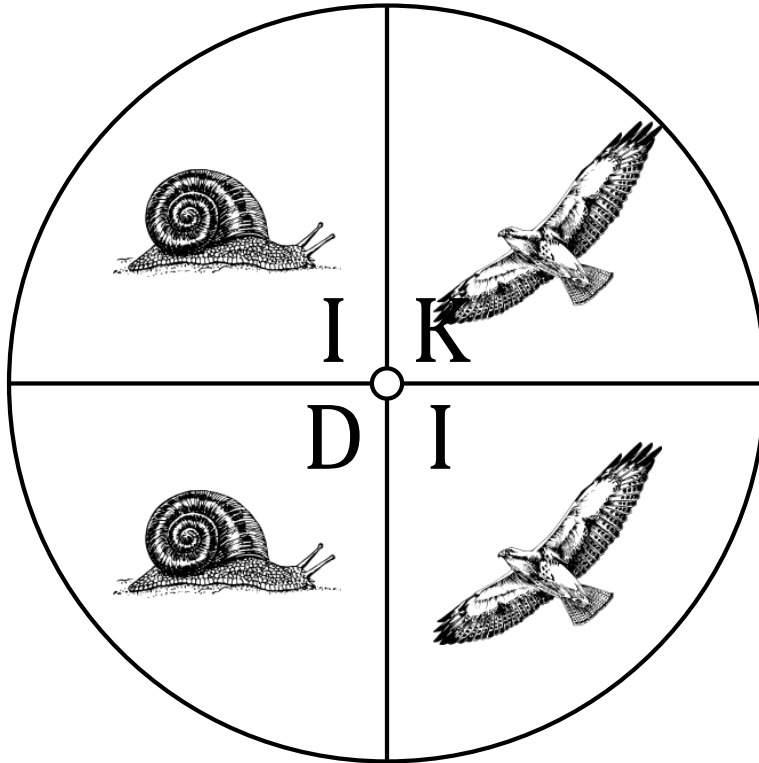
1. What is the probability of the spinner landing on a **K** in a single spin?
2. What is the probability of the spinner landing on a **D** in a single spin?
3. What is the probability of the spinner landing on **an I** in a single spin?
4. What is the probability of the spinner landing on a **snail** in a single spin?
5. What is the probability of the spinner landing on a **hawk** in a single spin?

Spinner Probabilities (F) Answers

Name: _____

Date: _____

Calculate the probability of your spinner landing on each situation.




1. What is the probability of the spinner landing on a **K** in a single spin? $\frac{1}{4} = 0.25 = 25\%$
2. What is the probability of the spinner landing on a **D** in a single spin? $\frac{1}{4} = 0.25 = 25\%$
3. What is the probability of the spinner landing on **an I** in a single spin? $\frac{2}{4} = \frac{1}{2} = 0.5 = 50\%$
4. What is the probability of the spinner landing on a **snail** in a single spin? $\frac{2}{4} = \frac{1}{2} = 0.5 = 50\%$
5. What is the probability of the spinner landing on a **hawk** in a single spin? $\frac{2}{4} = \frac{1}{2} = 0.5 = 50\%$

Spinner Probabilities (G)

Name: _____

Date: _____

Calculate the probability of your spinner landing on each situation.



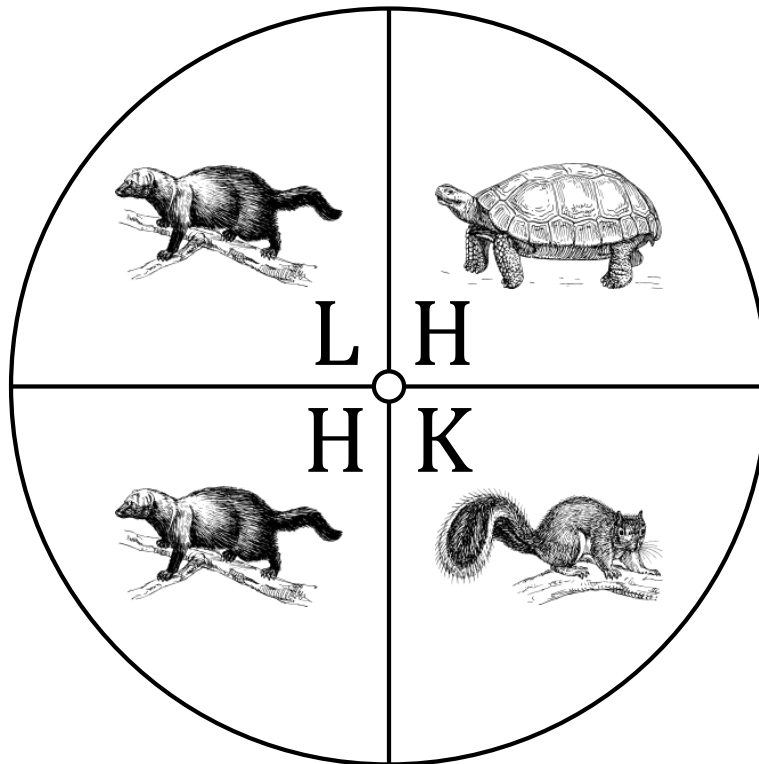
1. What is the probability of the spinner landing on a **K** in a single spin?
2. What is the probability of the spinner landing on **an H** in a single spin?
3. What is the probability of the spinner landing on **an L** in a single spin?
4. What is the probability of the spinner landing on a **squirrel** in a single spin?
5. What is the probability of the spinner landing on a **tortoise** in a single spin?
6. What is the probability of the spinner landing on a **fisher** in a single spin?

Spinner Probabilities (G) Answers

Name: _____

Date: _____

Calculate the probability of your spinner landing on each situation.



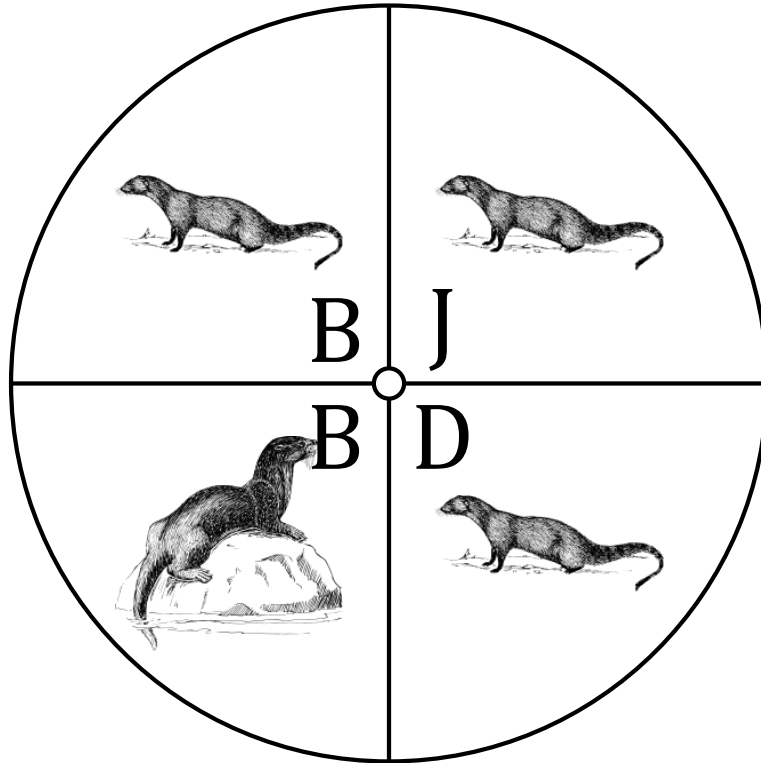
1. What is the probability of the spinner landing on a **K** in a single spin? $\frac{1}{4} = 0.25 = 25\%$
2. What is the probability of the spinner landing on **an H** in a single spin? $\frac{2}{4} = \frac{1}{2} = 0.5 = 50\%$
3. What is the probability of the spinner landing on **an L** in a single spin? $\frac{1}{4} = 0.25 = 25\%$
4. What is the probability of the spinner landing on a **squirrel** in a single spin? $\frac{1}{4} = 0.25 = 25\%$
5. What is the probability of the spinner landing on a **tortoise** in a single spin? $\frac{1}{4} = 0.25 = 25\%$
6. What is the probability of the spinner landing on a **fisher** in a single spin? $\frac{2}{4} = \frac{1}{2} = 0.5 = 50\%$

Spinner Probabilities (H)

Name: _____

Date: _____

Calculate the probability of your spinner landing on each situation.



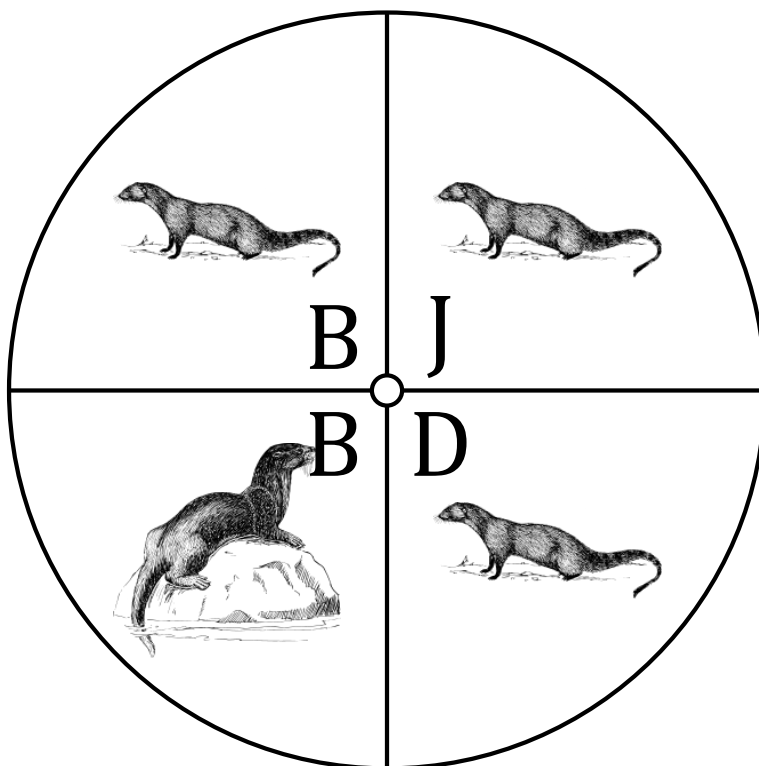
1. What is the probability of the spinner landing on a **B** in a single spin?
2. What is the probability of the spinner landing on a **J** in a single spin?
3. What is the probability of the spinner landing on a **D** in a single spin?
4. What is the probability of the spinner landing on **an otter** in a single spin?
5. What is the probability of the spinner landing on a **mongoose** in a single spin?

Spinner Probabilities (H) Answers

Name: _____

Date: _____

Calculate the probability of your spinner landing on each situation.



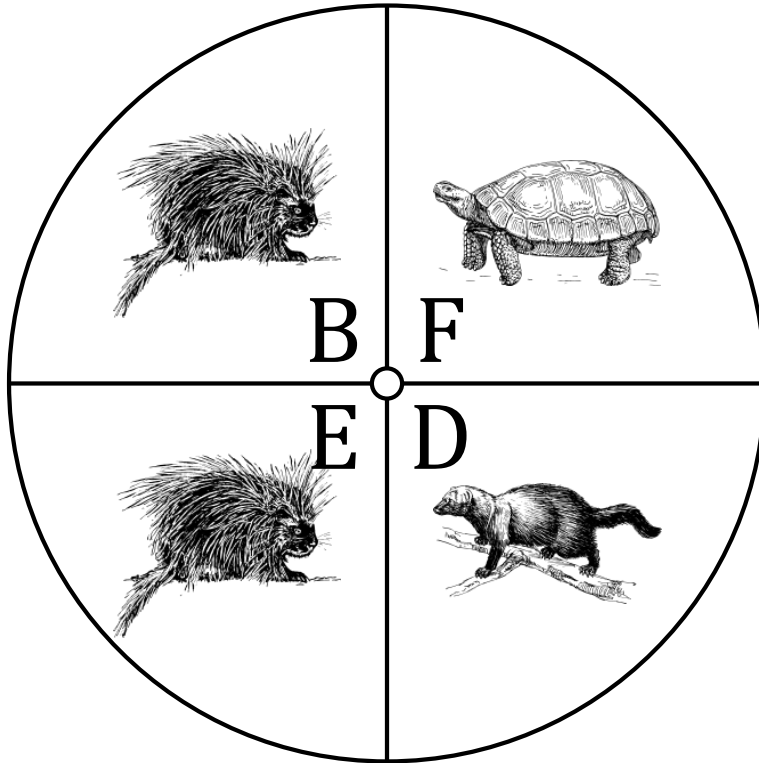
1. What is the probability of the spinner landing on a **B** in a single spin? $\frac{2}{4} = \frac{1}{2} = 0.5 = 50\%$
2. What is the probability of the spinner landing on a **J** in a single spin? $\frac{1}{4} = 0.25 = 25\%$
3. What is the probability of the spinner landing on a **D** in a single spin? $\frac{1}{4} = 0.25 = 25\%$
4. What is the probability of the spinner landing on **an otter** in a single spin? $\frac{1}{4} = 0.25 = 25\%$
5. What is the probability of the spinner landing on a **mongoose** in a single spin? $\frac{3}{4} = 0.75 = 75\%$

Spinner Probabilities (I)

Name: _____

Date: _____

Calculate the probability of your spinner landing on each situation.



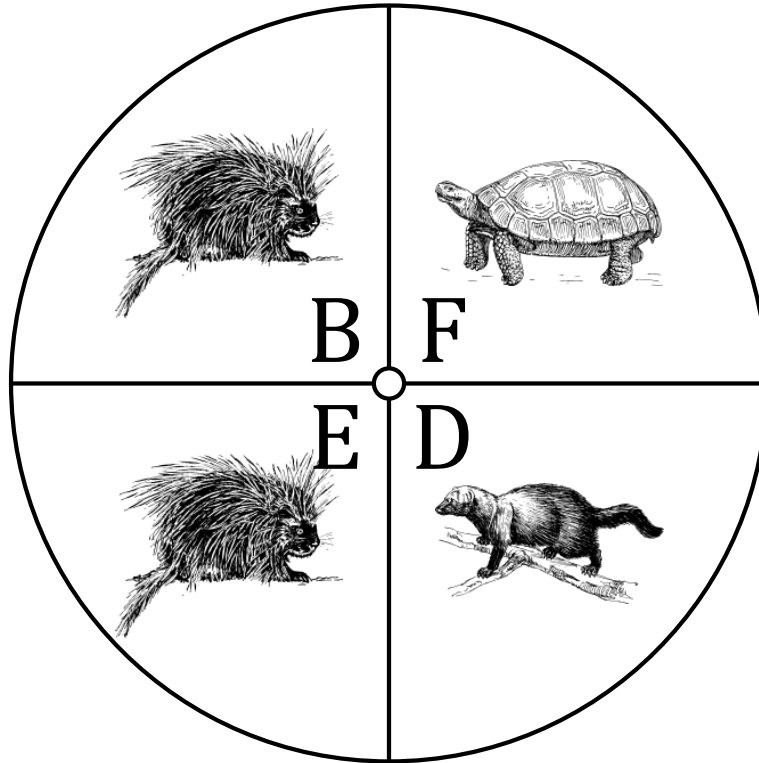
1. What is the probability of the spinner landing on a **D** in a single spin?
2. What is the probability of the spinner landing on **an E** in a single spin?
3. What is the probability of the spinner landing on a **B** in a single spin?
4. What is the probability of the spinner landing on a **porcupine** in a single spin?
5. What is the probability of the spinner landing on a **fisher** in a single spin?
6. What is the probability of the spinner landing on a **tortoise** in a single spin?

Spinner Probabilities (I) Answers

Name: _____

Date: _____

Calculate the probability of your spinner landing on each situation.




1. What is the probability of the spinner landing on a **D** in a single spin? $\frac{1}{4} = 0.25 = 25\%$
2. What is the probability of the spinner landing on **an E** in a single spin? $\frac{1}{4} = 0.25 = 25\%$
3. What is the probability of the spinner landing on a **B** in a single spin? $\frac{1}{4} = 0.25 = 25\%$
4. What is the probability of the spinner landing on a **porcupine** in a single spin? $\frac{2}{4} = \frac{1}{2} = 0.5 = 50\%$
5. What is the probability of the spinner landing on a **fisher** in a single spin? $\frac{1}{4} = 0.25 = 25\%$
6. What is the probability of the spinner landing on a **tortoise** in a single spin? $\frac{1}{4} = 0.25 = 25\%$

Spinner Probabilities (J)

Name: _____

Date: _____

Calculate the probability of your spinner landing on each situation.




1. What is the probability of the spinner landing on a **K** in a single spin?
2. What is the probability of the spinner landing on a **J** in a single spin?
3. What is the probability of the spinner landing on a **porcupine** in a single spin?
4. What is the probability of the spinner landing on a **fisher** in a single spin?
5. What is the probability of the spinner landing on a **raccoon** in a single spin?

Spinner Probabilities (J) Answers

Name: _____

Date: _____

Calculate the probability of your spinner landing on each situation.



1. What is the probability of the spinner landing on a **K** in a single spin? $\frac{1}{4} = 0.25 = 25\%$
2. What is the probability of the spinner landing on a **J** in a single spin? $\frac{3}{4} = 0.75 = 75\%$
3. What is the probability of the spinner landing on a **porcupine** in a single spin? $\frac{1}{4} = 0.25 = 25\%$
4. What is the probability of the spinner landing on a **fisher** in a single spin? $\frac{1}{4} = 0.25 = 25\%$
5. What is the probability of the spinner landing on a **raccoon** in a single spin? $\frac{1}{4} = 0.25 = 25\%$