


Thanksgiving Ratios (B)

Find each ratio and simplify, if necessary.



$$\begin{array}{ccccccc} \text{turkey} & : & \text{leaf} & = & & : & = & : \\ \text{leaf} & : & \text{turkey} & = & & : & = & : \end{array}$$



$$\begin{array}{ccccccc} \text{turkey} & : & \text{pie} & = & & : & = & : \\ \text{pie} & : & \text{turkey} & = & & : & = & : \end{array}$$




$$\begin{array}{ccccccc} \text{pumpkin} & : & \text{pie} & = & & : & = & : \\ \text{pie} & : & \text{pumpkin} & = & & : & = & : \end{array}$$



$$\begin{array}{ccccccc} \text{turkey} & : & \text{pumpkin} & = & & : & = & : \\ \text{pumpkin} & : & \text{turkey} & = & & : & = & : \end{array}$$

Thanksgiving Ratios (B) Answers


Find each ratio and simplify, if necessary.



$$\begin{aligned} \text{turkey} : \text{leaf} &= 10 : 1 = 10 : 1 \\ \text{leaf} : \text{turkey} &= 1 : 10 = 1 : 10 \end{aligned}$$



$$\begin{aligned} \text{turkey} : \text{pie} &= 2 : 1 = 2 : 1 \\ \text{pie} : \text{turkey} &= 1 : 2 = 1 : 2 \end{aligned}$$



$$\begin{aligned} \text{pumpkin} : \text{pie} &= 7 : 1 = 7 : 1 \\ \text{pie} : \text{pumpkin} &= 1 : 7 = 1 : 7 \end{aligned}$$



$$\begin{aligned} \text{turkey} : \text{pumpkin} &= 3 : 1 = 3 : 1 \\ \text{pumpkin} : \text{turkey} &= 1 : 3 = 1 : 3 \end{aligned}$$