


# Reading Time on Analog Clocks (E)

Name: \_\_\_\_\_

Date: \_\_\_\_\_

Read each time and write it in the space under the clock.

1.




Midnight

Noon

\_\_\_\_\_

2.




Midnight

Noon

\_\_\_\_\_

3.




Midnight

Noon

\_\_\_\_\_

4.




Noon

Midnight

\_\_\_\_\_

5.




Noon

Midnight

\_\_\_\_\_

6.



Noon

Midnight

\_\_\_\_\_

7.




Midnight

Noon

\_\_\_\_\_

8.




Midnight

Noon

\_\_\_\_\_

9.




Noon

Midnight

\_\_\_\_\_

10.




Noon

Midnight

\_\_\_\_\_

11.




Noon

Midnight

\_\_\_\_\_

12.



Midnight

Noon

\_\_\_\_\_