


Reading Time on Analog Clocks (E)

Name: _____

Date: _____

Read each time and write it in the space under the clock.

1.




2.




3.



4.



5.



6.




7.



8.



9.



10.



11.



12.





Reading Time on Analog Clocks (E) Answers


Name: _____


Date: _____

Read each time and write it in the space under the clock.

1. 
Noon Midnight
18:15

2. 
Midnight Noon
07:30


3. 
Noon Midnight
21:45

4. 
Midnight Noon
03:00


5. 
Midnight Noon
08:00

6. 
Noon Midnight
17:30

7. 
Midnight Noon
01:30

8. 
Midnight Noon
10:15

9. 
Noon Midnight
15:00

10. 
Noon Midnight
22:45

11. 
Midnight Noon
04:45

12. 
Noon Midnight
13:15