


# Reading Time on Analog Clocks (E)

Name: \_\_\_\_\_

Date: \_\_\_\_\_


Read each time and write it in the space under the clock.

1.



\_\_\_\_\_

2.



\_\_\_\_\_

3.




\_\_\_\_\_

4.



\_\_\_\_\_

5.



\_\_\_\_\_

6.



\_\_\_\_\_

7.



\_\_\_\_\_

8.




\_\_\_\_\_

9.




\_\_\_\_\_

10.



\_\_\_\_\_

11.



\_\_\_\_\_

12.



\_\_\_\_\_