



# Reading Time on Analog Clocks (D)


Name: \_\_\_\_\_


Date: \_\_\_\_\_


Read each time and write it in the space under the clock.


1.   
Noon Midnight  
\_\_\_\_\_


2.   
Midnight Noon  
\_\_\_\_\_


3.   
Midnight Noon  
\_\_\_\_\_


4.   
Noon Midnight  
\_\_\_\_\_


5.   
Midnight Noon  
\_\_\_\_\_


6.   
Midnight Noon  
\_\_\_\_\_


7.   
Noon Midnight  
\_\_\_\_\_

8.   
Noon Midnight  
\_\_\_\_\_

9.   
Noon Midnight  
\_\_\_\_\_

10.   
Midnight Noon  
\_\_\_\_\_

11.   
Midnight Noon  
\_\_\_\_\_

12.   
Noon Midnight  
\_\_\_\_\_