


Reading Time on Analog Clocks (J)

Name: _____

Date: _____

Read each time and write it in the space under the clock.


1.



Midnight

Noon


2.



Midnight

Noon


3.



Midnight

Noon


4.



Noon

Midnight


5.



Midnight

Noon


6.



Noon

Midnight


7.



Noon

Midnight


8.



Noon

Midnight


9.



Midnight

Noon


10.



Noon

Midnight


11.



Noon

Midnight

12.



Midnight


Noon


Reading Time on Analog Clocks (J) Answers

Name: _____


Date: _____

Read each time and write it in the space under the clock.


1. 
Midnight Noon
05:27:15

2. 
Midnight Noon
11:30:00


3. 
Midnight Noon
09:16:15


4. 
Noon Midnight
13:20:45


5. 
Midnight Noon
00:26:30


6. 
Noon Midnight
19:50:45


7. 
Noon Midnight
20:51:15

8. 
Noon Midnight
15:00:00

9. 
Midnight Noon
07:12:45

10. 
Noon Midnight
16:22:30

11. 
Noon Midnight
22:38:30

12. 
Midnight Noon
03:41:00