

# Reading Time on Analog Clocks (A)

Name: \_\_\_\_\_

Date: \_\_\_\_\_

Read each time and write it in the space under the clock.


1.



2.



3.



4.



# Reading Time on Analog Clocks (A) Answers

Name: \_\_\_\_\_

Date: \_\_\_\_\_

Read each time and write it in the space under the clock.

1.



2.



3.



4.




# Reading Time on Analog Clocks (B)

Name: \_\_\_\_\_

Date: \_\_\_\_\_

Read each time and write it in the space under the clock.

1.




Midnight

Noon

\_\_\_\_\_

2.




Midnight

Noon

\_\_\_\_\_

3.




Noon

Midnight

\_\_\_\_\_

4.



Noon

Midnight

\_\_\_\_\_


# Reading Time on Analog Clocks (B) Answers

Name: \_\_\_\_\_

Date: \_\_\_\_\_

Read each time and write it in the space under the clock.

1.




Midnight

Noon

10:37 AM

2.




Midnight

Noon

3:26 AM

3.




Noon

Midnight

10:45 PM

4.



Noon

Midnight

12:13 PM

# Reading Time on Analog Clocks (C)

Name: \_\_\_\_\_

Date: \_\_\_\_\_

Read each time and write it in the space under the clock.

1.



2.



3.



4.



# Reading Time on Analog Clocks (C) Answers

Name: \_\_\_\_\_

Date: \_\_\_\_\_

Read each time and write it in the space under the clock.

1.



2.



3.



4.



# Reading Time on Analog Clocks (D)

Name: \_\_\_\_\_

Date: \_\_\_\_\_

Read each time and write it in the space under the clock.

1.



2.



3.



4.



# Reading Time on Analog Clocks (D) Answers

Name: \_\_\_\_\_

Date: \_\_\_\_\_

Read each time and write it in the space under the clock.

1.



2.



3.



4.





# Reading Time on Analog Clocks (E)

Name: \_\_\_\_\_

Date: \_\_\_\_\_

Read each time and write it in the space under the clock.

1.



2.



3.



4.



# Reading Time on Analog Clocks (E) Answers

Name: \_\_\_\_\_

Date: \_\_\_\_\_

Read each time and write it in the space under the clock.

1.



2.



3.



4.



# Reading Time on Analog Clocks (F)

Name: \_\_\_\_\_


Date: \_\_\_\_\_

Read each time and write it in the space under the clock.

1.



2.



3.



4.



# Reading Time on Analog Clocks (F) Answers

Name: \_\_\_\_\_

Date: \_\_\_\_\_

Read each time and write it in the space under the clock.

1.



2.



3.



4.



# Reading Time on Analog Clocks (G)

Name: \_\_\_\_\_

Date: \_\_\_\_\_

Read each time and write it in the space under the clock.


1.



2.



3.



4.



# Reading Time on Analog Clocks (G) Answers

Name: \_\_\_\_\_

Date: \_\_\_\_\_

Read each time and write it in the space under the clock.

1.



2.



3.



4.



# Reading Time on Analog Clocks (H)

Name: \_\_\_\_\_

Date: \_\_\_\_\_

Read each time and write it in the space under the clock.


1.



2.



3.



4.



# Reading Time on Analog Clocks (H) Answers

Name: \_\_\_\_\_

Date: \_\_\_\_\_

Read each time and write it in the space under the clock.

1.



2.



3.



4.





# Reading Time on Analog Clocks (I)

Name: \_\_\_\_\_

Date: \_\_\_\_\_

Read each time and write it in the space under the clock.


1.



2.



3.



4.




# Reading Time on Analog Clocks (I) Answers

Name: \_\_\_\_\_

Date: \_\_\_\_\_

Read each time and write it in the space under the clock.

1.



2.



3.



4.




# Reading Time on Analog Clocks (J)

Name: \_\_\_\_\_

Date: \_\_\_\_\_

Read each time and write it in the space under the clock.

1.




Midnight

Noon

\_\_\_\_\_

2.

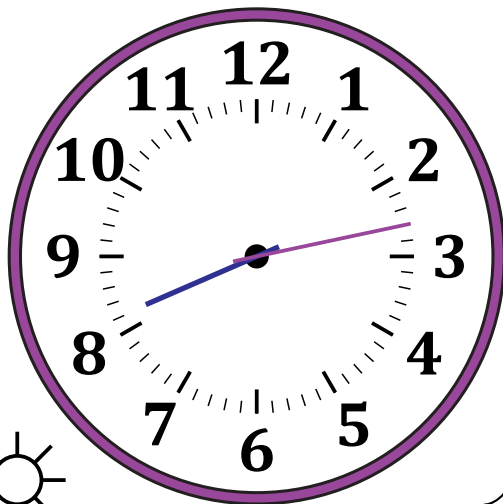


Noon

Midnight

\_\_\_\_\_

3.




Noon

Midnight

\_\_\_\_\_

4.



Midnight

Noon

\_\_\_\_\_


# Reading Time on Analog Clocks (J) Answers

Name: \_\_\_\_\_

Date: \_\_\_\_\_

Read each time and write it in the space under the clock.

1.




Midnight



Noon

8:43 AM

2.



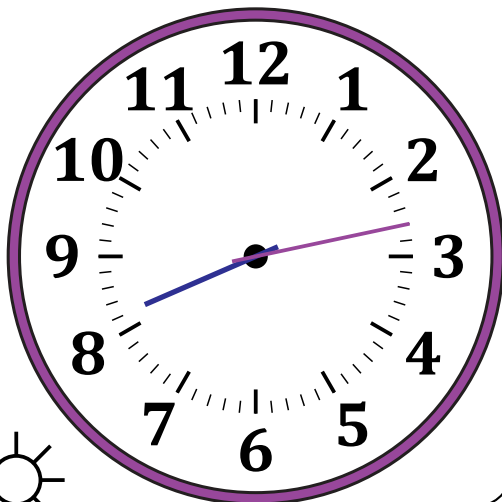
Noon



Midnight

12:37 PM

3.




Noon



Midnight

8:13 PM

4.



Midnight



Noon

2:22 AM