

Reading Time on Analog Clocks (J)

Name: _____

Date: _____

Read each time and write it in the space under the clock.


1.




2.




3.



4.



5.



6.



7.



8.



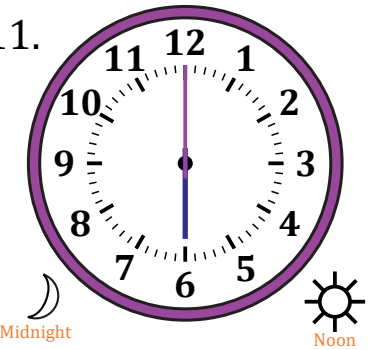
9.




10.



11.



12.



Reading Time on Analog Clocks (J) Answers

Name: _____

Date: _____

Read each time and write it in the space under the clock.

1.



2.



3.



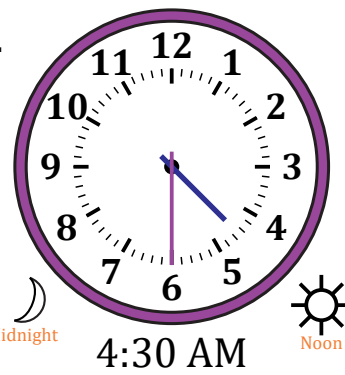
4.



5.



6.



7.



8.



9.



10.



11.



12.

