


Reading Time on Analog Clocks (B)

Name: _____


Date: _____

Read each time and write it in the space under the clock.


1.




2.




3.




4.




5.




6.




7.




8.




9.




10.



11.



12.




Reading Time on Analog Clocks (B) Answers

Name: _____

Date: _____

Read each time and write it in the space under the clock.

1. 

Noon
Midnight
11:01:15 PM

2. 

Noon
Midnight
12:32:35 PM

3. 

Midnight
Noon
7:28:05 AM

4. 


Noon
Midnight
6:28:50 PM

5. 

Noon
Midnight
4:34:55 PM

6. 

Midnight
Noon
5:57:45 AM

7. 

Midnight
Noon
12:45:25 AM

8. 

Midnight
Noon
3:04:10 AM

9. 

Noon
Midnight
3:21:20 PM

10. 

Noon
Midnight
8:30:00 PM

11. 

Midnight
Noon
8:59:30 AM

12. 

Midnight
Noon
10:01:40 AM