

# Reading Time on Analog Clocks (E)

Name: \_\_\_\_\_


Date: \_\_\_\_\_

Read each time and write it in the space under the clock.


1.




2.



3.




4.




5.




6.




7.




8.




9.




10.



11.



12.



# Reading Time on Analog Clocks (E) Answers

Name: \_\_\_\_\_

Date: \_\_\_\_\_

Read each time and write it in the space under the clock.

1.   

Noon
Midnight
7:03:30 PM

2.   

Midnight
Noon
7:07:00 AM

3.   

Noon
Midnight
9:37:30 PM

4.   

Midnight
Noon
1:40:30 AM

5.   

Noon
Midnight
2:13:00 PM

6.   

Noon
Midnight
10:13:00 PM

7.   


Midnight
Noon
2:57:00 AM

8.   

Midnight
Noon
8:02:00 AM

9.   

Midnight
Noon
5:48:00 AM

10.   

Midnight
Noon
11:52:30 AM

11.   

Noon
Midnight
4:24:30 PM

12.   

Noon
Midnight
1:34:30 PM