


# Reading Time on Analog Clocks (I)

Name: \_\_\_\_\_

Date: \_\_\_\_\_

Read each time and write it in the space under the clock.

1.




Midnight

Noon

\_\_\_\_\_

2.




Noon

Midnight

\_\_\_\_\_

3.

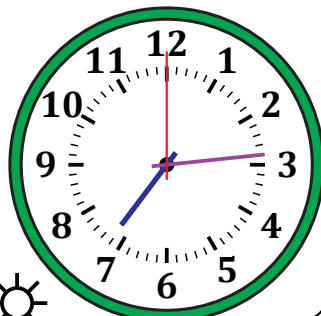


Noon

Midnight

\_\_\_\_\_

4.




Noon

Midnight

\_\_\_\_\_

5.




Midnight

Noon

\_\_\_\_\_

6.




Midnight

Noon

\_\_\_\_\_

7.




Noon

Midnight

\_\_\_\_\_

8.




Midnight

Noon

\_\_\_\_\_

9.




Midnight

Noon

\_\_\_\_\_

10.




Midnight

Noon

\_\_\_\_\_

11.




Noon

Midnight

\_\_\_\_\_

12.



Noon

Midnight

\_\_\_\_\_

# Reading Time on Analog Clocks (I) Answers

Name: \_\_\_\_\_

Date: \_\_\_\_\_

Read each time and write it in the space under the clock.

