



Sketching Time on Analog Clocks (E)


Name: _____


Date: _____


Sketch each time on the clock face above it.


1. 
Noon Midnight
20:39

2. 
Midnight Noon
11:00


3. 
Midnight Noon
09:49


4. 
Noon Midnight
16:02


5. 
Noon Midnight
19:21


6. 
Noon Midnight
22:45


7. 
Midnight Noon
03:09

8. 
Midnight Noon
06:27

9. 
Midnight Noon
04:35

10. 
Noon Midnight
15:49

11. 
Noon Midnight
12:01

12. 
Midnight Noon
01:42

Sketching Time on Analog Clocks (E) Answers

Name: _____

Date: _____

Sketch each time on the clock face above it.

