



Sketching Time on Analog Clocks (J)


Name: _____


Date: _____

Sketch each time on the clock face above it.


1. 
Noon Midnight
12:54


2. 
Noon Midnight
16:11


3. 
Noon Midnight
22:45


4. 
Noon Midnight
19:54


5. 
Midnight Noon
05:36

6. 
Midnight Noon
11:41


7. 
Midnight Noon
00:11

8. 
Noon Midnight
20:45

9. 
Midnight Noon
03:58

10. 
Noon Midnight
15:59

11. 
Midnight Noon
08:56

12. 
Midnight Noon
07:28

Sketching Time on Analog Clocks (J) Answers

Name: _____

Date: _____

Sketch each time on the clock face above it.

