



Sketching Time on Analog Clocks (E)


Name: _____


Date: _____


Sketch each time on the clock face above it.


1. 
Noon Midnight
12:40


2. 
Noon Midnight
21:10


3. 
Midnight Noon
09:20

4. 
Midnight Noon
05:35


5. 
Midnight Noon
00:05


6. 
Noon Midnight
17:45


7. 
Midnight Noon
03:00

8. 
Noon Midnight
14:55

9. 
Noon Midnight
19:30

10. 
Midnight Noon
07:50

11. 
Midnight Noon
10:15

12. 
Noon Midnight
23:25

Sketching Time on Analog Clocks (E) Answers

Name: _____

Date: _____

Sketch each time on the clock face above it.

