



# Sketching Time on Analog Clocks (F)


Name: \_\_\_\_\_


Date: \_\_\_\_\_


Sketch each time on the clock face above it.


1.   
Noon Midnight  
21:20

2.   
Noon Midnight  
22:35


3.   
Midnight Noon  
04:30


4.   
Noon Midnight  
19:40


5.   
Midnight Noon  
09:55


6.   
Noon Midnight  
13:10

7.   
Midnight Noon  
00:05

8.   
Midnight Noon  
06:15

9.   
Midnight Noon  
10:25

10.   
Noon Midnight  
17:00

11.   
Noon Midnight  
14:45

12.   
Midnight Noon  
03:50

# Sketching Time on Analog Clocks (F) Answers

Name: \_\_\_\_\_

Date: \_\_\_\_\_

Sketch each time on the clock face above it.

