



Sketching Time on Analog Clocks (G)


Name: _____


Date: _____


Sketch each time on the clock face above it.


1. 
Noon Midnight
14:55


2. 
Noon Midnight
13:40


3. 
Midnight Noon
04:10


4. 
Midnight Noon
06:20

5. 
Midnight Noon
03:15


6. 
Midnight Noon
09:00


7. 
Noon Midnight
19:35

8. 
Noon Midnight
22:30

9. 
Noon Midnight
21:45

10. 
Noon Midnight
17:50

11. 
Midnight Noon
10:05

12. 
Midnight Noon
00:25

Sketching Time on Analog Clocks (G) Answers

Name: _____

Date: _____

Sketch each time on the clock face above it.

