



Sketching Time on Analog Clocks (H)


Name: _____


Date: _____


Sketch each time on the clock face above it.


1. 
Noon Midnight
18:10


2. 
Midnight Noon
08:30


3. 
Noon Midnight
21:05


4. 
Noon Midnight
12:50


5. 
Noon Midnight
16:20

6. 
Midnight Noon
11:45


7. 
Noon Midnight
23:55

8. 
Midnight Noon
05:25

9. 
Midnight Noon
07:40

10. 
Midnight Noon
00:15

11. 
Midnight Noon
02:35

12. 
Noon Midnight
14:00

Sketching Time on Analog Clocks (H) Answers

Name: _____

Date: _____

Sketch each time on the clock face above it.

