


Sketching Time on Analog Clocks (I)


Name: _____


Date: _____


Sketch each time on the clock face above it.


1. 
Noon Midnight
13:35


2. 
Midnight Noon
03:40


3. 
Midnight Noon
10:50


4. 
Noon Midnight
22:20


5. 
Noon Midnight
16:30

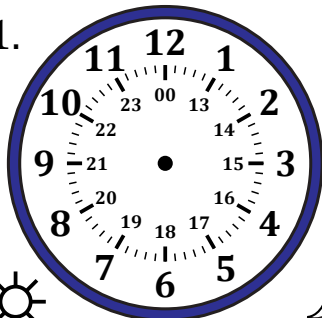
6. 
Noon Midnight
20:45

7. 
Midnight Noon
01:05

8. 
Midnight Noon
09:10

9. 
Midnight Noon
05:00

10. 
Midnight Noon
06:15

11. 
Noon Midnight
14:55

12. 
Noon Midnight
19:25

Sketching Time on Analog Clocks (I) Answers

Name: _____

Date: _____

Sketch each time on the clock face above it.

