



Sketching Time on Analog Clocks (D)


Name: _____

Date: _____


Sketch each time on the clock face above it.

1. 
Midnight 01:15 Noon


2. 
Midnight 06:30 Noon


3. 
Noon 22:15 Midnight


4. 
Noon 13:30 Midnight


5. 
Noon 17:45 Midnight


6. 
Noon 14:30 Midnight


7. 
Midnight 03:00 Noon

8. 
Midnight 09:45 Noon

9. 
Noon 20:45 Midnight

10. 
Midnight 04:00 Noon

11. 
Noon 18:15 Midnight

12. 
Midnight 10:00 Noon


Sketching Time on Analog Clocks (D) Answers

Name: _____

Date: _____

Sketch each time on the clock face above it.

1.



2.




3.



4.



5.



6.




7.



8.



9.



10.



11.



12.

