



# Sketching Time on Analog Clocks (J)


Name: \_\_\_\_\_


Date: \_\_\_\_\_


Sketch each time on the clock face above it.


1.   
16:15

2.   
10:30


3.   
23:45

4.   
13:30


5.   
15:00

6.   
05:15


7.   
06:00

8.   
19:45

9.   
09:15

10.   
20:45

11.   
01:30

12.   
02:00

# Sketching Time on Analog Clocks (J) Answers

Name: \_\_\_\_\_

Date: \_\_\_\_\_

Sketch each time on the clock face above it.

