



Sketching Time on Analog Clocks (B)


Name: _____


Date: _____


Sketch each time on the clock face above it.


1. 
Midnight 02:30 Noon


2. 
Noon 16:00 Midnight


3. 
Midnight 11:30 Noon


4. 
Noon 13:30 Midnight

5. 
Midnight 01:00 Noon

6. 
Noon 18:00 Midnight


7. 
Noon 20:00 Midnight

8. 
Midnight 04:30 Noon

9. 
Midnight 07:30 Noon

10. 
Noon 14:00 Midnight

11. 
Midnight 09:00 Noon

12. 
Noon 23:30 Midnight

Sketching Time on Analog Clocks (B) Answers

Name: _____

Date: _____

Sketch each time on the clock face above it.

