



Sketching Time on Analog Clocks (C)


Name: _____


Date: _____


Sketch each time on the clock face above it.


1. 
Noon Midnight
19:30

2. 
Midnight Noon
01:30


3. 
Noon Midnight
14:30

4. 
Noon Midnight
17:00


5. 
Midnight Noon
04:30


6. 
Noon Midnight
20:00

7. 
Noon Midnight
23:00

8. 
Midnight Noon
11:30

9. 
Midnight Noon
08:30

10. 
Noon Midnight
13:00

11. 
Midnight Noon
06:00

12. 
Midnight Noon
03:00