



# Sketching Time on Analog Clocks (D)


Name: \_\_\_\_\_


Date: \_\_\_\_\_


Sketch each time on the clock face above it.


1.   
Noon                      Midnight  
14:00


2.   
Midnight                      Noon  
02:30


3.   
Noon                      Midnight  
12:30

4.   
Noon                      Midnight  
22:00


5.   
Midnight                      Noon  
04:30


6.   
Noon                      Midnight  
17:00


7.   
Midnight                      Noon  
10:30

8.   
Midnight                      Noon  
08:00

9.   
Noon                      Midnight  
18:00

10.   
Midnight                      Noon  
01:30

11.   
Midnight                      Noon  
07:00

12.   
Noon                      Midnight  
21:30

# Sketching Time on Analog Clocks (D) Answers

Name: \_\_\_\_\_

Date: \_\_\_\_\_

Sketch each time on the clock face above it.

