



Sketching Time on Analog Clocks (E)


Name: _____

Date: _____


Sketch each time on the clock face above it.


1. 
Noon Midnight
22:00

2. 
Midnight Noon
11:00


3. 
Midnight Noon
09:30


4. 
Noon Midnight
13:30


5. 
Noon Midnight
21:00

6. 
Midnight Noon
00:00


7. 
Midnight Noon
02:30

8. 
Noon Midnight
19:00

9. 
Midnight Noon
05:30

10. 
Noon Midnight
16:30

11. 
Midnight Noon
06:00

12. 
Noon Midnight
15:30

Sketching Time on Analog Clocks (E) Answers

Name: _____

Date: _____

Sketch each time on the clock face above it.

