



Sketching Time on Analog Clocks (I)


Name: _____


Date: _____


Sketch each time on the clock face above it.


1. 
Noon Midnight
18:00


2. 
Noon Midnight
21:00


3. 
Noon Midnight
22:00


4. 
Midnight Noon
07:00


5. 
Midnight Noon
09:00

6. 
Midnight Noon
00:00


7. 
Midnight Noon
05:00

8. 
Midnight Noon
11:00

9. 
Midnight Noon
03:00

10. 
Noon Midnight
16:00

11. 
Noon Midnight
14:00

12. 
Noon Midnight
12:00

Sketching Time on Analog Clocks (I) Answers

Name: _____

Date: _____

Sketch each time on the clock face above it.

