



Sketching Time on Analog Clocks (J)


Name: _____


Date: _____


Sketch each time on the clock face above it.


1. 
Midnight Noon
04:00

2. 
Noon Midnight
16:00


3. 
Noon Midnight
22:00

4. 
Midnight Noon
06:00


5. 
Noon Midnight
21:00


6. 
Midnight Noon
10:00

7. 
Noon Midnight
15:00

8. 
Midnight Noon
08:00

9. 
Noon Midnight
13:00

10. 
Midnight Noon
00:00

11. 
Midnight Noon
03:00

12. 
Noon Midnight
18:00


Sketching Time on Analog Clocks (J) Answers

Name: _____

Date: _____

Sketch each time on the clock face above it.

1.



2.



3.



4.




5.



6.



7.




8.



9.



10.



11.



12.

