



Sketching Time on Analog Clocks (B)

Name: _____


Date: _____

Sketch each time on the clock face above it.

1. 
Noon 23:55:44 Midnight


2. 
Noon 16:06:01 Midnight

3. 
Midnight 00:36:53 Noon


4. 
Midnight 11:53:53 Noon


5. 
Midnight 02:45:07 Noon


6. 
Noon 21:12:02 Midnight


7. 
Noon 18:15:31 Midnight

8. 
Midnight 05:55:35 Noon

9. 
Midnight 06:34:37 Noon

10. 
Noon 13:37:33 Midnight

11. 
Noon 14:47:47 Midnight

12. 
Midnight 09:58:37 Noon