



Sketching Time on Analog Clocks (C)


Name: _____


Date: _____


Sketch each time on the clock face above it.

1. 
Midnight Noon
11:03:20


2. 
Midnight Noon
08:12:50

3. 
Noon Midnight
18:59:45


4. 
Noon Midnight
13:10:06


5. 
Noon Midnight
21:33:46

6. 
Noon Midnight
17:00:08


7. 
Midnight Noon
07:07:01

8. 
Noon Midnight
15:10:06

9. 
Midnight Noon
00:35:50

10. 
Midnight Noon
04:40:08

11. 
Midnight Noon
03:05:42

12. 
Noon Midnight
23:51:59

Sketching Time on Analog Clocks (C) Answers

Name: _____

Date: _____

Sketch each time on the clock face above it.

