



# Sketching Time on Analog Clocks (D)


Name: \_\_\_\_\_


Date: \_\_\_\_\_

Sketch each time on the clock face above it.


1.   
Noon 21:35:11 Midnight


2.   
Midnight 04:22:53 Noon


3.   
Midnight 11:28:38 Noon


4.   
Midnight 08:53:25 Noon


5.   
Midnight 07:58:44 Noon


6.   
Noon 22:43:11 Midnight


7.   
Midnight 01:26:28 Noon

8.   
Noon 17:54:04 Midnight

9.   
Midnight 03:33:02 Noon

10.   
Noon 14:56:30 Midnight

11.   
Noon 12:50:56 Midnight

12.   
Noon 18:58:53 Midnight

# Sketching Time on Analog Clocks (D) Answers

Name: \_\_\_\_\_

Date: \_\_\_\_\_

Sketch each time on the clock face above it.

