



# Sketching Time on Analog Clocks (E)


Name: \_\_\_\_\_


Date: \_\_\_\_\_


Sketch each time on the clock face above it.


1.   
Midnight Noon  
11:22:20


2.   
Midnight Noon  
09:28:51


3.   
Noon Midnight  
19:32:15


4.   
Noon Midnight  
12:35:59


5.   
Noon Midnight  
20:32:54


6.   
Midnight Noon  
06:14:04


7.   
Noon Midnight  
16:02:22

8.   
Noon Midnight  
23:36:14

9.   
Midnight Noon  
04:41:45

10.   
Noon Midnight  
14:19:34

11.   
Midnight Noon  
02:33:35

12.   
Midnight Noon  
01:29:14

# Sketching Time on Analog Clocks (E) Answers

Name: \_\_\_\_\_

Date: \_\_\_\_\_

Sketch each time on the clock face above it.

