



Sketching Time on Analog Clocks (F)


Name: _____


Date: _____


Sketch each time on the clock face above it.


1. 
Noon 13:23:56 Midnight


2. 
Noon 16:04:18 Midnight


3. 
Noon 14:14:19 Midnight


4. 
Midnight 05:54:15 Noon

5. 
Noon 18:46:19 Midnight


6. 
Noon 22:48:29 Midnight


7. 
Midnight 10:12:51 Noon

8. 
Midnight 09:15:01 Noon

9. 
Midnight 01:00:52 Noon

10. 
Noon 20:13:01 Midnight

11. 
Midnight 06:08:50 Noon

12. 
Midnight 02:18:10 Noon

Sketching Time on Analog Clocks (F) Answers

Name: _____

Date: _____

Sketch each time on the clock face above it.

