



Sketching Time on Analog Clocks (F)


Name: _____


Date: _____


Sketch each time on the clock face above it.


1. 
Noon Midnight
13:23:56


2. 
Noon Midnight
16:04:18

3. 
Noon Midnight
14:14:19


4. 
Midnight Noon
05:54:15

5. 
Noon Midnight
18:46:19

6. 
Noon Midnight
22:48:29


7. 
Midnight Noon
10:12:51

8. 
Midnight Noon
09:15:01

9. 
Midnight Noon
01:00:52

10. 
Noon Midnight
20:13:01

11. 
Midnight Noon
06:08:50

12. 
Midnight Noon
02:18:10