



Sketching Time on Analog Clocks (I)


Name: _____


Date: _____


Sketch each time on the clock face above it.


1. 
Midnight Noon
00:42:03


2. 
Midnight Noon
05:24:10


3. 
Midnight Noon
07:26:23


4. 
Noon Midnight
17:17:24


5. 
Midnight Noon
11:38:57

6. 
Noon Midnight
12:29:45

7. 
Noon Midnight
21:10:40

8. 
Noon Midnight
23:40:27

9. 
Noon Midnight
15:38:26

10. 
Noon Midnight
18:38:54

11. 
Midnight Noon
02:35:55

12. 
Midnight Noon
08:10:36

Sketching Time on Analog Clocks (I) Answers

Name: _____

Date: _____

Sketch each time on the clock face above it.

