



Sketching Time on Analog Clocks (J)


Name: _____


Date: _____

Sketch each time on the clock face above it.


1. 
Noon Midnight
15:00:00


2. 
Noon Midnight
16:07:42


3. 
Noon Midnight
22:38:02


4. 
Midnight Noon
07:12:43


5. 
Midnight Noon
00:15:59


6. 
Noon Midnight
12:14:40


7. 
Midnight Noon
09:48:37

8. 
Noon Midnight
19:17:28

9. 
Noon Midnight
21:24:55

10. 
Midnight Noon
11:37:03

11. 
Midnight Noon
02:13:22

12. 
Midnight Noon
04:56:17

Sketching Time on Analog Clocks (J) Answers

Name: _____

Date: _____

Sketch each time on the clock face above it.

