


Sketching Time on Analog Clocks (E)

Name: _____

Date: _____

Sketch each time on the clock face above it.

1.




Midnight

Noon

03:16:07

Detailed description: A circular analog clock face with a red border. The outer ring is marked with numbers 1 through 12. The inner ring is marked with numbers 13 through 23, with 00 at the 12 o'clock position. The clock hands are not drawn. Below the clock, there is a crescent moon icon on the left labeled 'Midnight' and a sun icon on the right labeled 'Noon'. The time '03:16:07' is written below the clock and underlined.

2.



Noon

Midnight

20:16:42

Detailed description: A circular analog clock face with a red border. The outer ring is marked with numbers 1 through 12. The inner ring is marked with numbers 13 through 23, with 00 at the 12 o'clock position. The clock hands are not drawn. Below the clock, there is a sun icon on the left labeled 'Noon' and a crescent moon icon on the right labeled 'Midnight'. The time '20:16:42' is written below the clock and underlined.

3.




Noon

Midnight

15:43:52

Detailed description: A circular analog clock face with a red border. The outer ring is marked with numbers 1 through 12. The inner ring is marked with numbers 13 through 23, with 00 at the 12 o'clock position. The clock hands are not drawn. Below the clock, there is a sun icon on the left labeled 'Noon' and a crescent moon icon on the right labeled 'Midnight'. The time '15:43:52' is written below the clock and underlined.

4.



Midnight

Noon

09:52:28

Detailed description: A circular analog clock face with a red border. The outer ring is marked with numbers 1 through 12. The inner ring is marked with numbers 13 through 23, with 00 at the 12 o'clock position. The clock hands are not drawn. Below the clock, there is a crescent moon icon on the left labeled 'Midnight' and a sun icon on the right labeled 'Noon'. The time '09:52:28' is written below the clock and underlined.


Sketching Time on Analog Clocks (E) Answers

Name: _____

Date: _____

Sketch each time on the clock face above it.

1.




Midnight

Noon

03:16:07

2.




Noon

Midnight

20:16:42

3.




Noon

Midnight

15:43:52

4.



Midnight

Noon

09:52:28