



# Sketching Time on Analog Clocks (H)


Name: \_\_\_\_\_


Date: \_\_\_\_\_

Sketch each time on the clock face above it.


1.   
Noon 12:28:45 Midnight


2.   
Midnight 05:21:45 Noon


3.   
Noon 16:48:00 Midnight


4.   
Midnight 10:27:30 Noon


5.   
Midnight 08:02:00 Noon

6.   
Midnight 03:02:45 Noon


7.   
Noon 21:44:15 Midnight

8.   
Noon 15:02:15 Midnight

9.   
Noon 22:34:30 Midnight

10.   
Noon 19:16:15 Midnight

11.   
Midnight 01:13:30 Noon

12.   
Midnight 06:13:00 Noon

# Sketching Time on Analog Clocks (H) Answers

Name: \_\_\_\_\_

Date: \_\_\_\_\_

Sketch each time on the clock face above it.

