

# Sketching Time on Analog Clocks (C)

Name: \_\_\_\_\_

Date: \_\_\_\_\_

Sketch each time on the clock face above it.

1.

Midnight

Noon

02:51:45

2.

Noon

Midnight

20:10:30

3.

Noon

Midnight

17:45:15

4.

Midnight

Noon

08:01:00


# Sketching Time on Analog Clocks (C) Answers

Name: \_\_\_\_\_

Date: \_\_\_\_\_

Sketch each time on the clock face above it.

1.


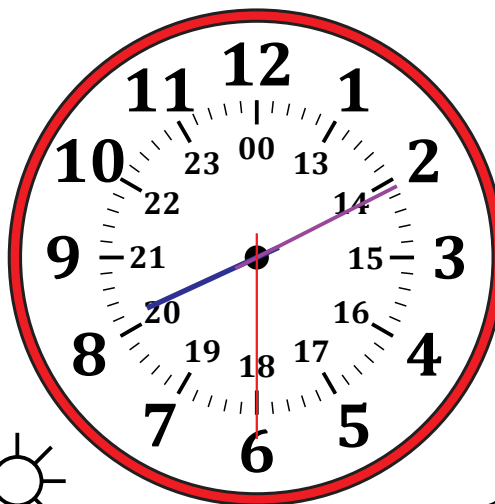


Midnight

02:51:45

Noon

2.

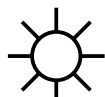



Noon

20:10:30

Midnight

3.




Noon

17:45:15



Midnight

4.



Midnight

08:01:00



Noon