







Sketching Time on Analog Clocks (B)




Name: _____




Date: _____




Sketch each time on the clock face above it.




1. 
Midnight  Noon 
7:51 AM




2. 
Noon  Midnight 
4:17 PM




3. 
Noon  Midnight 
3:13 PM


4. 
Midnight  Noon 
2:51 AM




5. 
Noon  Midnight 
7:22 PM




6. 
Noon  Midnight 
10:27 PM




7. 
Noon  Midnight 
12:10 PM

8. 
Midnight  Noon 
8:06 AM

9. 
Noon  Midnight 
8:51 PM

10. 
Midnight  Noon 
12:55 AM

11. 
Midnight  Noon 
11:34 AM

12. 
Midnight  Noon 
5:34 AM

Sketching Time on Analog Clocks (B) Answers

Name: _____

Date: _____

Sketch each time on the clock face above it.

