







# Sketching Time on Analog Clocks (B)




Name: \_\_\_\_\_




Date: \_\_\_\_\_




Sketch each time on the clock face above it.




1.   
Midnight  Noon   
7:51 AM




2.   
Noon  Midnight   
4:17 PM




3.   
Noon  Midnight   
3:13 PM


4.   
Midnight  Noon   
2:51 AM




5.   
Noon  Midnight   
7:22 PM




6.   
Noon  Midnight   
10:27 PM




7.   
Noon  Midnight   
12:10 PM

8.   
Midnight  Noon   
8:06 AM

9.   
Noon  Midnight   
8:51 PM

10.   
Midnight  Noon   
12:55 AM

11.   
Midnight  Noon   
11:34 AM

12.   
Midnight  Noon   
5:34 AM